

LINEAR EQUATION IN TWO VARIABLES

3

CHAPTER

CONTENTS

- Linear equation in two variables
- General form of pair of linear equation
- Graph of linear equation in two variables
- Graphical representation of pair of linear equation
- Types of solutions
- Methods of Solving system of linear equation
- Word problems

▶ LINEAR EQUATIONS IN TWO VARIABLES

A statement of equality of two algebraic expressions, which involve one or more unknown quantities is known as an equation. If there are two unknown quantities then equation is called linear equation in two variables.

A linear equation is an equation which involves linear polynomials.

A value of the variable which makes the two sides of the equation equal is called the solution of the equation.

Same quantity can be added/subtracted to/from both the sides of an equation without changing the equality.

Both the sides of an equation can be multiplied/divided by the same non-zero number without changing the equality.

Note :- To find value of variables in any equation we required number of equation equal to number of variables in equation.

▶ GENERAL FORM OF PAIR OF LINEAR EQUATION

$$\begin{cases} a_1x + b_1y + c_1 = 0 \\ a_2x + b_2y + c_2 = 0 \end{cases}$$

where a_1, b_1, c_1 & a_2, b_2, c_2 are constants.

▶ GRAPH OF LINEAR EQUATION $ax + by + c = 0$ IN TWO VARIABLES, WHERE $a \neq 0, b \neq 0$

(i) **Step I** : Obtain the linear equation, let the equation be $ax + by + c = 0$.

(ii) **Step II** : Express y in terms of x to obtain

$$y = - \left(\frac{ax + c}{b} \right)$$

(iii) **Step III** : Give any two values to x and calculate the corresponding values of y from the expression in step II to obtain two solutions, say (α_1, β_1) and (α_2, β_2) . If possible take values of x as integers in such a manner that the corresponding values of y are also integers.

(iv) **Step IV** : Plot points (α_1, β_1) and (α_2, β_2) on a graph paper.

(v) **Step V** : Join the points marked in step IV to obtain a line. The line obtained is the graph of the equation $ax + by + c = 0$.

❖ EXAMPLES ❖

Ex.1 Draw the graph of the equation $y - x = 2$.

Sol. We have,

$$y - x = 2$$

$$\Rightarrow y = x + 2$$

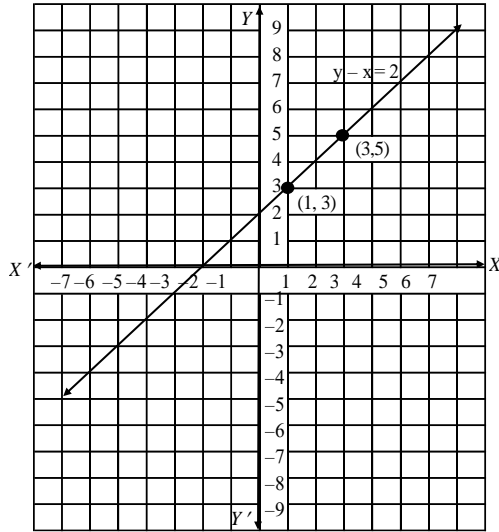
$$\text{When } x = 1, \text{ we have : } y = 1 + 2 = 3$$

$$\text{When } x = 3, \text{ we have : } y = 3 + 2 = 5$$

Thus, we have the following table exhibiting the abscissa and ordinates of points on the line represented by the given equation.

x	1	3
y	3	5

Plotting the points (1, 3) and (3, 5) on the graph paper and drawing a line joining them, we obtain the graph of the line represented by the given equation as shown in Fig.



Ex.2 Draw a graph of the line $x - 2y = 3$. From the graph, find the coordinates of the point when (i) $x = -5$ (ii) $y = 0$.

Sol. We have $x - 2y = 3 \Rightarrow y = \frac{x-3}{2}$

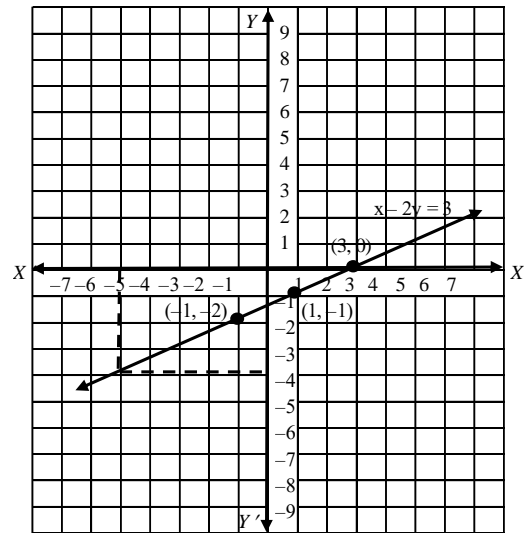
When $x = 1$, we have : $y = \frac{1-3}{2} = -1$

When $x = -1$, we have : $y = \frac{-1-3}{2} = -2$

Thus, we have the following table :

x	1	-1
y	-1	-2

Plotting points (1, -1) & (-1, -2) on graph paper & joining them, we get straight line as shown in fig. This line is required graph of equation $x - 2y = 3$.



To find the coordinates of the point when $x = -5$, we draw a line parallel to y-axis and passing through $(-5, 0)$. This line meets the graph of $x - 2y = 3$ at a point from which we draw a line parallel to x-axis which crosses y-axis at $y = -4$. So, the coordinates of the required point are $(-5, -4)$.

Since $y = 0$ on x-axis. So, the required point is the point where the line meets x-axis. From the graph the coordinates of such point are $(3, 0)$.

Hence, required points are $(-5, -4)$ and $(3, 0)$.

➤ GRAPHICAL REPRESENTATION OF PAIR OF LINEAR EQUATIONS

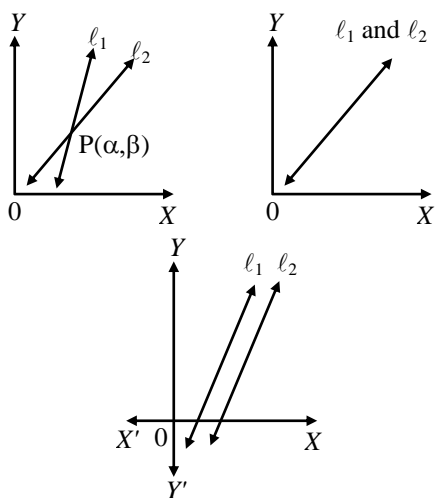
Let the system of pair of linear equations be

$$a_1x + b_1y = c_1 \quad \dots(1)$$

$$a_2x + b_2y = c_2 \quad \dots(2)$$

We know that given two lines in a plane, only one of the following three possibilities can happen -

- (i) The two lines will intersect at one point.
- (ii) The two lines will not intersect, however far they are extended, i.e., they are parallel.
- (iii) The two lines are coincident lines.



❖ EXAMPLES ❖

Ex.3 The path of highway number 1 is given by the equation $x + y = 7$ and the highway number 2 is given by the equation $5x + 2y = 20$. Represent these equations geometrically.

Sol. We have, $x + y = 7$
 $\Rightarrow y = 7 - x$ (1)

In tabular form

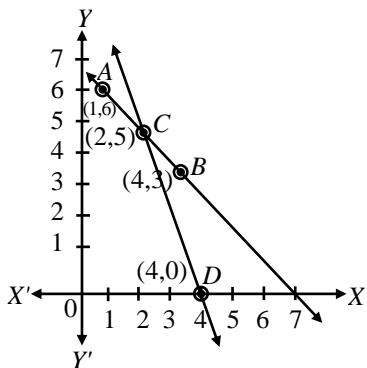
x	1	4
y	6	3
Po int s	A	B

and $5x + 2y = 20$

$\Rightarrow y = \frac{20 - 5x}{2}$ (2)

In tabular form

x	2	4
y	5	0
Po int s	C	D



Plot the points A (1, 6), B(4, 3) and join them to form a line AB.

Similarly, plot the points C(2, 5), D (4, 0) and join them to get a line CD. Clearly, the two lines intersect at the point C. Now, every point on the line AB gives us a solution of equation (1). Every point on CD gives us a solution of equation (2).

Ex.4 A father tells his daughter, “ Seven years ago, I was seven times as old as you were then. Also, three years from now, I shall be three times as old as you will be.” Represent this situation algebraically and graphically.

Sol. Let the present age of father be x-years and that of daughter = y years

Seven years ago father’s age
 $= (x - 7)$ years
 Seven years ago daughter’s age
 $= (y - 7)$ years

According to the problem

$(x - 7) = 7(y - 7)$
 or $x - 7y = -42$ (1)

After 3 years father’s age $= (x + 3)$ years

After 3 years daughter’s age $= (y + 3)$ years

According to the condition given in the question

$x + 3 = 3(y + 3)$
 or $x - 3y = 6$ (2)

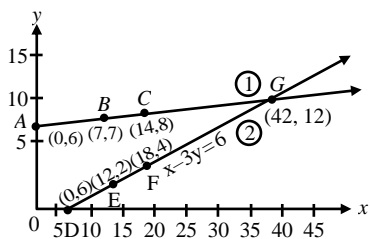
$x - 7y = -42$

x	0	7	14
$y = \frac{x + 42}{7}$	6	7	8
Po int s	A	B	C

$x - 3y = 6$

x	6	12	18
$y = \frac{x - 6}{3}$	0	2	4
Po int s	D	E	F

Plot the points A(0, 6), B(7, 7), C(14, 8) and join them to get a straight line ABC. Similarly plot the points D(6, 0), E(12, 2) and F(18, 4) and join them to get a straight line DEF.



Ex.5 10 students of class X took part in a Mathematics quiz. If the number of girls is 4 more than the number of boys, find the number of boys and girls who took part in the quiz.

Sol. Let the number of boys be x and the number of girls be y .

Then the equations formed are

$$x + y = 10 \quad \dots(1)$$

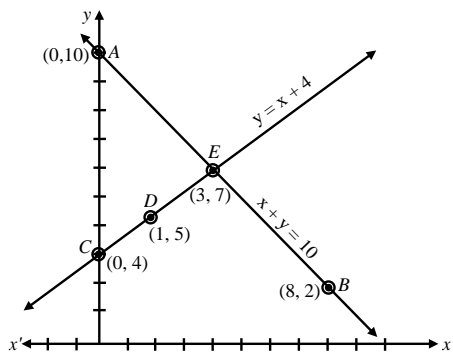
and $y = x + 4 \quad \dots(2)$

Let us draw the graphs of equations (1) and (2) by finding two solutions for each of the equations. The solutions of the equations are given.

$x + y = 10$		
x	0	8
$y = 10 - x$	10	2
Point s	A	B

$y = x + 4$			
x	0	1	3
$y = x + 4$	4	5	7
Point s	C	D	E

Plotting these points we draw the lines AB and CE passing through them to represent the equations. The two lines AB and CE intersect at the point E (3, 7). So, $x = 3$ and $y = 7$ is the required solution of the pair of linear equations.



i.e. Number of boys = 3
Number of girls = 7.

Verification :

Putting $x = 3$ and $y = 7$ in (1), we get
L.H.S. = $3 + 7 = 10 =$ R.H.S.,
(1) is verified.

Putting $x = 3$ and $y = 7$ in (2), we get
 $7 = 3 + 4 = 7$, (2) is verified.

Hence, both the equations are satisfied.

Ex.6 Half the perimeter of a garden, whose length is 4 more than its width is 36m. Find the dimensions of the garden.

Sol. Let the length of the garden be x and width of the garden be y .

Then the equation formed are

$$x = y + 4 \quad \dots(1)$$

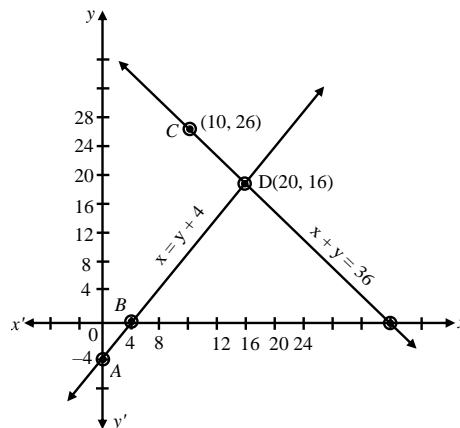
Half perimeter = 36

$$x + y = 36 \quad \dots(2)$$

$x = y + 4$		
x	0	4
y	-4	0
Point s	A	B

$x + y = 36$		
x	10	20
$y = 36 - x$	26	16
Point s	C	D

Plotting these points we draw the lines AB and CD passing through them to represent the equations.



The two lines AB and CD intersect at the point (20, 16), So, $x = 20$ and $y = 16$ is the required solution of the pair of linear equations i.e. length of the garden is 20 m and width of the garden is 16 m.

Verification :

Putting $x = 20$ and $y = 16$ in (1).

We get

$$20 = 16 + 4 = 20, (1) \text{ is verified.}$$

Putting $x = 20$ and $y = 16$ in (2). we get

$$20 + 16 = 36$$

$$\Rightarrow 36 = 36, (2) \text{ is verified.}$$

Hence, both the equations are satisfied.

Ex.7 Draw the graphs of the equations $x - y + 1 = 0$ and $3x + 2y - 12 = 0$. Determine the coordinates of the vertices of the triangle

formed by these lines and the x-axis, and shade the triangular region.

Sol. Pair of linear equations are :

$$x - y + 1 = 0 \quad \dots(1)$$

$$3x + 2y - 12 = 0 \quad \dots(2)$$

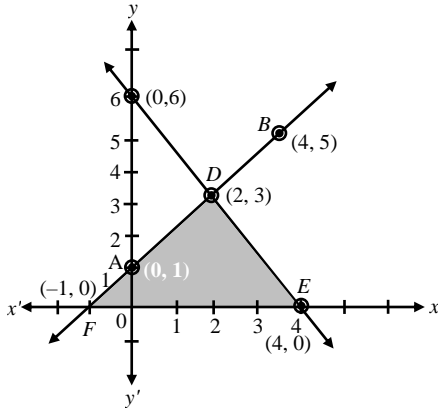
In tabular form

x	0	4
y = x + 1	1	5
Po int s	A	B

In tabular form

x	0	2
y = $\frac{12 - 3x}{2}$	6	3
Po int s	C	D

Plot the points A(0, 1), B(4, 5) and join them to get a line AB. Similarly, plot the points C(0, 6), D(2, 3) and join them to form a line CD.



Clearly, the two lines intersect each other at the point D(2, 3). Hence $x = 2$ and $y = 3$ is the solution of the given pair of equations.

The line CD cuts the x-axis at the point E (4, 0) and the line AB cuts the x-axis at the point F(-1, 0).

Hence, the coordinates of the vertices of the triangle are ; D(2, 3), E(4, 0), F(-1, 0).

Verification :

Both the equations (1) and (2) are satisfied by $x = 2$ and $y = 3$. Hence, Verified.

TYPES OF SOLUTIONS

There are three types of solutions :

1. Unique solution.
2. Infinitely many solutions
3. No solution.

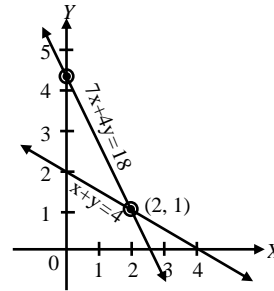
(A) Consistent :

If a system of simultaneous linear equations has at least one solution then the system is said to be consistent.

(i) Consistent equations with unique solution : The graphs of two equations intersect at a unique point. **For example.** Consider

$$x + 2y = 4$$

$$7x + 4y = 18$$



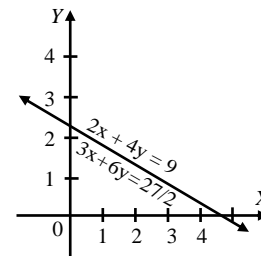
The graphs (lines) of these equations intersect each other at the point (2, 1) i.e., $x = 2, y = 1$.

Hence, the equations are consistent with unique solution.

(ii) Consistent equations with infinitely many solutions : The graphs (lines) of the two equations will be coincident.

For example. Consider

$$2x + 4y = 9 \Rightarrow 3x + 6y = \frac{27}{2}$$



The graphs of the above equations coincide. Coordinates of every point on the lines are the solutions of the equations. Hence, the given equations are consistent with infinitely many solutions.

(B) Inconsistent Equation :

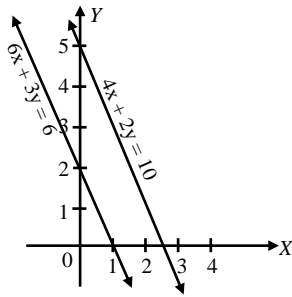
If a system of simultaneous linear equations has no solution, then the system is said to be inconsistent.

No Solution : The graph (lines) of the two equations are parallel.

For example. Consider

$$4x + 2y = 10$$

$$6x + 3y = 6$$



The graphs (lines) of the given equations are parallel. They will never meet at a point. So, there is no solution. Hence, the equations are inconsistent.

S.No	Graph of Two Equations	Types of Equations
1	Intersecting lines	Consistent, with unique solution
2	Coincident	Consistent with infinite solutions
3	Parallel lines	Inconsistent (No solution)

❖ EXAMPLES ❖

Ex.8 Show graphically that the system of equations $x - 4y + 14 = 0$; $3x + 2y - 14 = 0$ is consistent with unique solution.

Sol. The given system of equations is $x - 4y + 14 = 0$ (1)
 $\Rightarrow y = \frac{x+14}{4}$

When $x = 6$, $y = \frac{6+14}{4} = 5$

When $x = -2$, $y = \frac{-2+14}{4} = 3$

In tabular form

x	6	-2
y	5	3
Point s	A	B

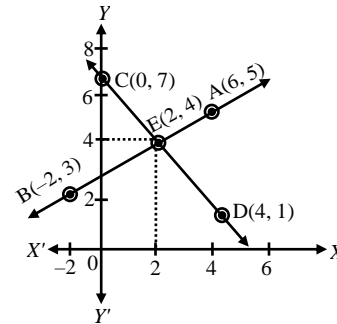
$3x + 2y - 14 = 0$ (2)
 $\Rightarrow y = \frac{-3x+14}{2}$

When $x = 0$, $y = \frac{0+14}{2} = 7$

When $x = 4$, $y = \frac{-3 \times 4 + 14}{2} = 1$

In tabular form

x	0	4
y	7	1
Point s	C	D



The given equations representing two lines, intersect each other at a unique point (2, 4). Hence, the equations are consistent with unique solution.

Ex.9 Show graphically that the system of equations

$2x + 5y = 16$; $3x + \frac{15}{2}y = 24$

has infinitely many solutions.

Sol. The given system of equations is

$2x + 5y = 16$ (1)

$\Rightarrow y = \frac{16-2x}{5}$

When $x = 3$, $y = \frac{16-6}{5} = 2$

When $x = -2$, $y = \frac{16-2 \times (-2)}{5} = 4$

In tabular form

x	-2	3
y	4	2
Point s	A	B

$3x + \frac{15}{2}y = 24$ (1)

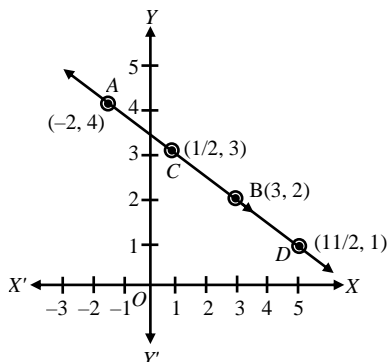
$\Rightarrow y = \frac{48-6x}{15}$ (2)

When $x = \frac{1}{2}$, $y = \frac{48-3}{15} = 3$

When $x = \frac{11}{2}$, $y = \frac{48-6 \times \left(\frac{11}{2}\right)}{15} = 1$

In tabular form

x	$\frac{1}{2}$	$\frac{11}{2}$
y	3	1
Points	C	D



The lines of two equations are coincident. Coordinates of every point on this line are the solution.

Hence, the given equations are consistent with infinitely many solutions.

Ex.10 Show graphically that the system of equations $2x + 3y = 10$, $4x + 6y = 12$ has no solution.

Sol. The given equations are

$$2x + 3y = 10$$

$$\Rightarrow 3y = 10 - 2x \quad \Rightarrow y = \frac{10 - 2x}{3}$$

$$\text{When } x = -4, y = \frac{10 - 2 \times (-4)}{3} = \frac{10 + 8}{3} = 6$$

$$\text{When } x = 2, y = \frac{10 - 2 \times 2}{3} = \frac{10 - 4}{3} = 2$$

In tabular form

x	-4	2
y	6	2
Points	A	B

$$4x + 6y = 12$$

$$\Rightarrow 6y = 12 - 4x$$

$$\Rightarrow 6y = 12 - 4x$$

$$\Rightarrow y = \frac{12 - 4x}{6}$$

$$\text{When } x = -3, y = \frac{12 - 4 \times (-3)}{6} = \frac{12 + 12}{6} = 4$$

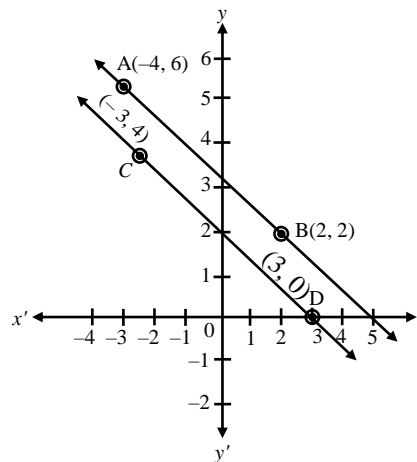
$$\text{When } x = 3, y = \frac{12 - 4 \times (3)}{6} = \frac{12 - 12}{6} = 0$$

In tabular form

x	-3	3
y	4	0
Points	C	D

Plot the points A(-4, 6), B(2, 2) and join them to form a line AB. Similarly, plot the points

C(-3, 4), D(3, 0) and join them to get a line CD.



Clearly, the graphs of the given equations are parallel lines. As they have no common point, there is no common solution. Hence, the given system of equations has no solution.

Ex.11 Given the linear equation $2x + 3y - 8 = 0$, write another linear equation in two variables such that the geometrical representing of the pair so formed is :

- intersecting lines
- parallel lines
- coincident lines

Sol. We have,

$$2x + 3y - 8 = 0$$

- Another linear equation in two variables such that the geometrical representation of the pair so formed is intersecting lines is

$$3x - 2y - 8 = 0$$

- Another parallel lines to above line is

$$4x + 6y - 22 = 0$$

- Another coincident line to above line is

$$6x + 9y - 24 = 0$$

Ex.12 Solve the following system of linear equations graphically;

$$3x + y - 11 = 0 ; x - y - 1 = 0$$

Shade the region bounded by these lines and also y-axis. Then, determine the areas of the region bounded by these lines and y-axis.

Sol. We have ;

$$3x + y - 11 = 0 \text{ and } x - y - 1 = 0$$

(a) Graph of the equation $3x + y - 11 = 0$

We have, $3x + y - 11 = 0$

$$\Rightarrow y = -3x + 11$$

When, $x = 2$, $y = -3 \times 2 + 11 = 5$

When, $x = 3$, $y = -3 \times 3 + 11 = 2$

Then, we have the following table :

x	2	3
y	5	2

Plotting the points P (2, 5) and Q(3, 2) on the graph paper and drawing a line joining between them, we get the graph of the equation $3x + y - 11 = 0$ as shown in fig.

(b) Graph of the equation $x - y - 1 = 0$

We have,

$$x - y - 1 = 0$$

$$\Rightarrow y = x - 1$$

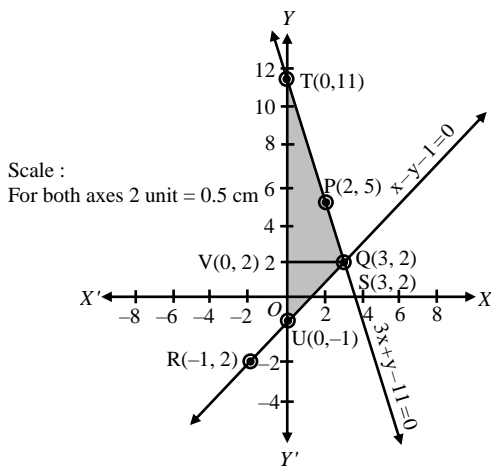
When, $x = -1$, $y = -2$

When, $x = 3$, $y = 2$

Then, we have the following table :

x	-1	3
y	-2	2

Plotting the points R(-1, -2) and S(3, 2) on the same graph paper and drawing a line joining between them, we get the graph of the equation $x - y - 1 = 0$ as shown in fig.



You can observe that two lines intersect at Q(3, 2). So, $x = 3$ and $y = 2$. The area enclosed

by the lines represented by the given equations and also the y-axis is shaded.

So, the enclosed area = Area of the shaded portion

$$= \text{Area of } \Delta QUT = \frac{1}{2} \times \text{base} \times \text{height}$$

$$= \frac{1}{2} \times (\text{TU} \times \text{VQ}) = \frac{1}{2} \times (\text{TO} + \text{OU}) \times \text{VQ}$$

$$= \frac{1}{2} (11 + 1) \times 3 = \frac{1}{2} \times 12 \times 3 = 18 \text{ sq. units.}$$

Hence, required area is 18 sq. units.

Ex.13 Draw the graphs of the following equations ;

$$2x - 3y = -6 ; 2x + 3y = 18 ; y = 2$$

Find the vertices of the triangles formed and also find the area of the triangle.

Sol. (a) Graph of the equation $2x - 3y = -6$;

We have, $2x - 3y = -6 \Rightarrow y = \frac{2x+6}{3}$

When, $x = 0$, $y = \frac{2 \times 0 + 6}{3} = 2$

When, $x = 3$, $y = \frac{2 \times 3 + 6}{3} = 4$

Then, we have the following table :

x	0	3
y	2	4

Plotting the points P(0, 2) and Q(3, 4) on the graph paper and drawing a line joining between them we get the graph of the equation $2x - 3y = -6$ as shown in fig.

(b) Graph of the equation $2x + 3y = 18$;

We have $2x + 3y = 18 \Rightarrow y = \frac{-2x+18}{3}$

When, $x = 0$, $y = \frac{-2 \times 0 + 18}{3} = 6$

When, $x = -3$, $y = \frac{-2 \times (-3) + 18}{3} = 8$

Then, we have the following table :

x	0	-3
y	6	8

Plotting the points R(0, 6) and S(-3, 8) on the same graph paper and drawing a line joining between them, we get the graph of the equation $2x + 3y = 18$ as shown in fig.

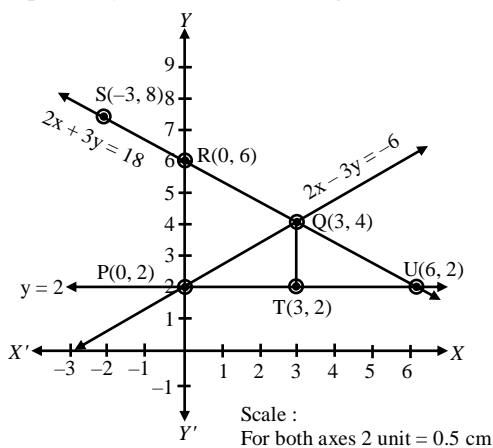
(c) Graph of the equation $y = 2$

It is a clear fact that $y = 2$ is for every value of x . We may take the points $T(3, 2)$, $U(6, 2)$ or any other values.

Then, we get the following table :

x	3	6
y	2	2

Plotting the points $T(3, 2)$ and $U(6, 2)$ on the same graph paper and drawing a line joining between them, we get the graph of the equation $y = 2$ as shown in fig.



From the fig., we can observe that the lines taken in pairs intersect each other at points $Q(3, 4)$, $U(6, 2)$ and $P(0, 2)$. These form the three vertices of the triangle PQU .

To find area of the triangle so formed

The triangle is so formed is PQU (see fig.)

In the ΔPQU

$$QT \text{ (altitude)} = 2 \text{ units}$$

$$\text{and } PU \text{ (base)} = 6 \text{ units}$$

$$\text{so, area of } \Delta PQU = \frac{1}{2} (\text{base} \times \text{height})$$

$$= \frac{1}{2} (PU \times QT) = \frac{1}{2} \times 6 \times 2 \text{ sq. units}$$

$$= 6 \text{ sq. units.}$$

▶ IMPORTANT POINTS TO BE REMEMBERED

Pair of lines $a_1x + b_1y + c_1 = 0$ $a_2x + b_2y + c_2 = 0$	$\frac{a_1}{a_2}$	$\frac{b_1}{b_2}$	$\frac{c_1}{c_2}$	Compare the ratio
$2x + 3y + 4 = 0$ $5x + 6y + 9 = 0$	$\frac{2}{5}$	$\frac{3}{6}$	$\frac{4}{9}$	$\frac{a_1}{a_2} \neq \frac{b_1}{b_2}$
$x + 2y + 5 = 0$ $3x + 6y + 15 = 0$	$\frac{1}{3}$	$\frac{2}{6}$	$\frac{5}{15}$	$\frac{a_1}{a_2} = \frac{b_1}{b_2} = \frac{c_1}{c_2}$
$2x - 3y + 4 = 0$ $4x - 6y + 10 = 0$	$\frac{2}{4}$	$\frac{-3}{-6}$	$\frac{4}{10}$	$\frac{a_1}{a_2} = \frac{b_1}{b_2} \neq \frac{c_1}{c_2}$

Graphical representation	Algebraic interpretation
Intersecting lines	Exactly one solution (unique)
Coincident lines	Infinitely many solutions
Parallel lines	No solution

From the table above you can observe that if the line $a_1x + b_1y + c_1 = 0$ and $a_2x + b_2y + c_2 = 0$ are

(i)	for the intersecting lines then $\frac{a_1}{a_2} \neq \frac{b_1}{b_2}$
(ii)	for the coincident lines then $\frac{a_1}{a_2} = \frac{b_1}{b_2} = \frac{c_1}{c_2}$
(iii)	for the parallel lines then $\frac{a_1}{a_2} = \frac{b_1}{b_2} \neq \frac{c_1}{c_2}$

Ex.14 On comparing the ratios $\frac{a_1}{a_2}$, $\frac{b_1}{b_2}$ and $\frac{c_1}{c_2}$

and without drawing them, find out whether the lines representing the following pairs of linear equations intersect at a point, are parallel or coincide.

(i) $5x - 4y + 8 = 0$, $7x + 6y - 9 = 0$

(ii) $9x + 3y + 12 = 0$, $18x + 6y + 24 = 0$

(iii) $6x - 3y + 10 = 0$, $2x - y + 9 = 0$

Sol. Comparing the given equations with standard forms of equations $a_1x + b_1y + c_1 = 0$ and $a_2x + b_2y + c_2 = 0$ we have,

(i) $a_1 = 5$, $b_1 = -4$, $c_1 = 8$;

$a_2 = 7$, $b_2 = 6$, $c_2 = -9$

$$\therefore \frac{a_1}{a_2} = \frac{5}{7}, \frac{b_1}{b_2} = \frac{-4}{6}$$

$$\Rightarrow \frac{a_1}{a_2} \neq \frac{b_1}{b_2}$$

Thus, the lines representing the pair of linear equations are intersecting.

(ii) $a_1 = 9$, $b_1 = 3$, $c_1 = 12$;

$a_2 = 18$, $b_2 = 6$, $c_2 = 24$

$$\therefore \frac{a_1}{a_2} = \frac{9}{18} = \frac{1}{2}, \frac{b_1}{b_2} = \frac{3}{6} = \frac{1}{2}$$

and $\frac{c_1}{c_2} = \frac{12}{24} = \frac{1}{2}$

$$\Rightarrow \frac{a_1}{a_2} = \frac{b_1}{b_2} = \frac{c_1}{c_2}$$

Thus, the lines representing the pair of linear equation coincide.

$$(iii) a_1 = 6, b_1 = -3, c_1 = 10;$$

$$a_2 = 2, b_2 = -1, c_2 = 9$$

$$\therefore \frac{a_1}{a_2} = \frac{6}{2} = 3, \frac{b_1}{b_2} = \frac{-3}{-1} = 3, \frac{c_1}{c_2} = \frac{10}{9}$$

$$\Rightarrow \frac{a_1}{a_2} = \frac{b_1}{b_2} \neq \frac{c_1}{c_2}$$

Thus, the lines representing the pair of linear equations are parallel.

➤ ALGEBRAIC SOLUTION OF A SYSTEM OF LINEAR EQUATIONS

Sometimes, graphical method does not give an accurate answer. While reading the coordinates of a point on a graph paper, we are likely to make an error. So, we require some precise method to obtain accurate result. Algebraic methods given below yield accurate answers.

- (i) Method of elimination by substitution.
- (ii) Method of elimination by equating the coefficients.
- (iii) Method of cross multiplication.

➤ SUBSTITUTION METHOD

In this method, we first find the value of one variable (y) in terms of another variable (x) from one equation. Substitute this value of y in the second equation. Second equation becomes a linear equation in x only and it can be solved for x.

Putting the value of x in the first equation, we can find the value of y.

This method of solving a system of linear equations is known as the method of **elimination by substitution**.

‘Elimination’, because we get rid of y or ‘eliminate’ y from the second equation. ‘Substitution’, because we ‘substitute’ the value of y in the second equation.

Working rule :

Let the two equations be

$$a_1x + b_1y + c_1 = 0 \quad \dots(1)$$

$$a_2x + b_2y + c_2 = 0 \quad \dots(2)$$

Step I : Find the value of one variable, say y, in terms of the other i.e., x from any equation, say (1).

Step II : Substitute the value of y obtained in step 1 in the other equation i.e., equation (2). This equation becomes equation in one variable x only.

Step III : Solve the equation obtained in step II to get the value of x.

Step IV : Substitute the value of x from step II to the equation obtained in step I. From this equation, we get the value of y. In this way, we get the solution i.e. values of x and y.

Remark : Verification is a must to check the answer.

❖ EXAMPLES ❖

Ex.15 Solve each of the following system of equations by eliminating x (by substitution) :

- | | |
|---------------------|--------------------|
| (i) $x + y = 7$ | (ii) $x + y = 7$ |
| $2x - 3y = 11$ | $12x + 5y = 7$ |
| (iii) $2x - 7y = 1$ | (iv) $3x - 5y = 1$ |
| $4x + 3y = 15$ | $5x + 2y = 19$ |
| (v) $5x + 8y = 9$ | |
| $2x + 3y = 4$ | |

Sol. (i) We have ;

$$x + y = 7 \quad \dots(1)$$

$$2x - 3y = 11 \quad \dots(2)$$

We shall eliminate x by substituting its value from one equation into the other. from equaton (1), we get ;

$$x + y = 7 \quad \Rightarrow \quad x = 7 - y$$

Substituting the value of x in equation (2), we get ;

$$2 \times (7 - y) - 3y = 11$$

$$\Rightarrow 14 - 2y - 3y = 11$$

$$\Rightarrow -5y = -3 \quad \text{or, } y = 3/5.$$

Now, substituting the value of y in equation (1), we get;

$$x + 3/5 = 7 \quad \Rightarrow \quad x = 32/5.$$

Hence, $x = 32/5$ and $y = 3/5$.

(ii) We have,

$$x + y = 7 \quad \dots(1)$$

$$12x + 5y = 7 \quad \dots(2)$$

From equation (1), we have;

$$x + y = 7$$

$$\Rightarrow \quad x = 7 - y$$

Substituting the value of y in equation (2), we get ;

$$\Rightarrow 12(7 - y) + 5y = 7$$

$$\Rightarrow 84 - 12y + 5y = 7$$

$$\Rightarrow -7y = -77$$

$$\Rightarrow y = 11$$

Now, Substituting the value of y in equation (1), we get ;

$$x + 11 = 7 \quad \Rightarrow x = -4$$

Hence, $x = -4$, $y = 11$.

(iii) We have;

$$2x - 7y = 1 \quad \dots(1)$$

$$4x + 3y = 15 \quad \dots(2)$$

From equation (1), we get

$$2x - 7y = 1 \quad \Rightarrow x = \frac{7y+1}{2}$$

Substituting the value of x in equation (2), we get ;

$$\Rightarrow 4 \times \frac{7y+1}{2} + 3y = 15$$

$$\Rightarrow \frac{28y+4}{2} + 3y = 15$$

$$\Rightarrow 28y + 4 + 6y = 30$$

$$\Rightarrow 34y = 26 \quad \Rightarrow y = \frac{26}{34} = \frac{13}{17}$$

Now, substituting the value of y in equation (1), we get;

$$2x - 7 \times \frac{13}{17} = 1$$

$$\Rightarrow 2x = 1 + \frac{91}{17} = \frac{108}{17} \Rightarrow x = \frac{108}{34} = \frac{54}{17}$$

Hence, $x = \frac{54}{17}$, $y = \frac{13}{17}$

(iv) We have ;

$$3x - 5y = 1 \quad \dots (1)$$

$$5x + 2y = 19 \quad \dots (2)$$

From equation (1), we get;

$$3x - 5y = 1 \quad \Rightarrow x = \frac{5y+1}{3}$$

Substituting the value of x in equation (2), we get ;

$$\Rightarrow 5 \times \frac{5y+1}{3} + 2y = 19$$

$$\Rightarrow 25y + 5 + 6y = 57 \quad \Rightarrow 31y = 52$$

Thus, $y = \frac{52}{31}$

Now, substituting the value of y in equation (1), we get ;

$$3x - 5 \times \frac{52}{31} = 1$$

$$\Rightarrow 3x - \frac{260}{31} = 1 \Rightarrow 3x = \frac{291}{31}$$

$$\Rightarrow x = \frac{291}{31 \times 3} = \frac{97}{31}$$

Hence, $x = \frac{97}{31}$, $y = \frac{52}{31}$

(v) We have,

$$5x + 8y = 9 \quad \dots(1)$$

$$2x + 3y = 4 \quad \dots(2)$$

From equation (1), we get;

$$5x + 8y = 9 \quad \Rightarrow x = \frac{9-8y}{5}$$

Substituting the value of x in equation (2), we get ;

$$\Rightarrow 2 \times \frac{9-8y}{5} + 3y = 4$$

$$\Rightarrow 18 - 16y + 15y = 20$$

$$\Rightarrow -y = 2 \quad \text{or} \quad y = -2$$

Now, substituting the value of y in equation (1), we get ;

$$5x + 8(-2) = 9$$

$$\Rightarrow 5x = 25 \quad \Rightarrow x = 5$$

Hence, $x = 5$, $y = -2$.

Ex.16 Solve the following systems of equations by eliminating 'y' (by substitution) :

(i) $3x - y = 3$ (ii) $7x + 11y - 3 = 0$

$7x + 2y = 20$ $8x + y - 15 = 0$

(iii) $2x + y - 17 = 0$

$17x - 11y - 8 = 0$

Sol. (i) We have;

$$3x - y = 3 \quad \dots(1)$$

$$7x + 2y = 20 \quad \dots(2)$$

From equation (1), we get ;

$$3x - y = 3 \quad \Rightarrow y = 3x - 3$$

Substituting the value of 'y' in equation (2), we get ;

$$\Rightarrow 7x + 2 \times (3x - 3) = 20$$

$$\Rightarrow 7x + 6x - 6 = 20$$

$\Rightarrow 13x = 26 \quad \Rightarrow x = 2$
 Now, substituting $x = 2$ in equation (1), we get;

$$3 \times 2 - y = 3$$

$$\Rightarrow y = 3$$

Hence, $x = 2, \quad y = 3.$

(ii) We have;

$$7x + 11y - 3 = 0 \quad \dots(1)$$

$$8x + y - 15 = 0 \quad \dots(2)$$

From equation (1), we get;

$$7x + 11y = 3$$

$$\Rightarrow y = \frac{3-7x}{11}$$

Substituting the value of 'y' in equation (2), we get;

$$\Rightarrow 8x + \frac{3-7x}{11} = 15$$

$$\Rightarrow 88x + 3 - 7x = 165$$

$$\Rightarrow 81x = 162$$

$$\Rightarrow x = 2$$

Now, substituting, $x = 2$ in the equation (2), we get ;

$$8 \times 2 + y = 15$$

$$\Rightarrow y = -1$$

Hence, $x = 2, \quad y = -1.$

(iii) We have,

$$2x + y = 17 \quad \dots(1)$$

$$17x - 11y = 8 \quad \dots(2)$$

From equation (1), we get;

$$2x + y = 17 \quad \Rightarrow y = 17 - 2x$$

Substituting the value of 'y' in equation (2), we get ;

$$17x - 11(17 - 2x) = 8$$

$$\Rightarrow 17x - 187 + 22x = 8$$

$$\Rightarrow 39x = 195$$

$$\Rightarrow x = 5$$

Now, substituting the value of 'x' in equation (1), we get ;

$$2 \times 5 + y = 17$$

$$\Rightarrow y = 7$$

Hence, $x = 5, \quad y = 7.$

Ex.17 Solve the following systems of equations,

(i) $\frac{15}{u} + \frac{2}{v} = 17$

$$\frac{1}{u} + \frac{1}{v} = \frac{36}{5}$$

(ii) $\frac{11}{v} - \frac{7}{u} = 1$

$$\frac{9}{v} - \frac{4}{u} = 6$$

Sol. (i) The given system of equation is ;

$$\frac{15}{u} + \frac{2}{v} = 17 \quad \dots(1)$$

$$\frac{1}{u} + \frac{1}{v} = \frac{36}{5} \quad \dots(2)$$

Considering $1/u = x, 1/v = y$, the above system of linear equations can be written as :

$$15x + 2y = 17 \quad \dots(3)$$

$$x + y = \frac{36}{5} \quad \dots(4)$$

Multiplying (4) by 15 and (iii) by 1, we get ;

$$15x + 2y = 17 \quad \dots(5)$$

$$15x + 15y = \frac{36}{5} \times 15 = 108 \quad \dots(6)$$

Subtracting (6) from (5), we get;

$$-13y = -91 \quad \Rightarrow y = 7$$

Substituting $y = 7$ in (4), we get ;

$$x + 7 = \frac{36}{5} \quad \Rightarrow x = \frac{36}{5} - 7 = \frac{1}{5}$$

But, $y = \frac{1}{v} = 7 \quad \Rightarrow v = \frac{1}{7}$

and, $x = \frac{1}{u} = \frac{1}{5} \Rightarrow u = 5$

Hence, the required solution of the given system is $u = 5, v = 1/7.$

(ii) The given system of equation is ;

$$\frac{11}{v} - \frac{7}{u} = 1; \quad \frac{9}{v} - \frac{4}{u} = 6$$

Taking $1/v = x$ and $1/u = y$, the above system of equations can be written as ;

$$11x - 7y = 1 \quad \dots(1)$$

$$9x - 4y = 6 \quad \dots(2)$$

Multiplying (1) by 4 and (2) by 7, we get,

$$44x - 28y = 4 \quad \dots(3)$$

$$63x - 28y = 42 \quad \dots(4)$$

Subtracting (4) from (3) we get,

$$-19x = -38 \quad \Rightarrow x = 2$$

Substituting the above value of x in (2), we get;

$$9 \times 2 - 4y = 6 \Rightarrow -4y = -12 \\ \Rightarrow y = 3$$

$$\text{But, } x = \frac{1}{v} = 2 \Rightarrow v = \frac{1}{2}$$

$$\text{and, } y = \frac{1}{u} = 3$$

$$\Rightarrow u = \frac{1}{3}$$

Hence, the required solution of the given system of the equation is ;

$$v = \frac{1}{2}, \quad u = \frac{1}{3}$$

Ex.19 Solve $2x + 3y = 11$ and $2x - 4y = -24$ and hence find the value of 'm' for which $y = mx + 3$.

Sol. We have,

$$2x + 3y = 11 \quad \dots(1)$$

$$2x - 4y = -24 \quad \dots(2)$$

From (1), we have $2x = 11 - 3y$

Substituting $2x = 11 - 3y$ in (2), we get

$$11 - 3y - 4y = -24$$

$$-7y = -24 - 11$$

$$\Rightarrow -7y = -35$$

$$\Rightarrow y = 5$$

Putting $y = 5$ in (1), we get

$$2x + 3 \times 5 = 11$$

$$2x = 11 - 15$$

$$\Rightarrow x = -\frac{4}{2} = -2$$

Hence, $x = -2$ and $y = 5$

Again putting $x = -2$ and $y = 5$ in $y = mx + 3$, we get

$$5x = m(-2) + 3$$

$$\Rightarrow -2m = 5 - 3$$

$$\Rightarrow m = \frac{2}{-2} = -1$$



METHOD OF ELIMINATION BY EQUATING THE COEFFICIENTS

Step I : Let the two equations obtained be

$$a_1x + b_1y + c_1 = 0 \quad \dots(1)$$

$$a_2x + b_2y + c_2 = 0 \quad \dots(2)$$

Step II : Multiplying the given equation so as to make the co-efficients of the variable to be eliminated equal.

Step III : Add or subtract the equations so obtained in Step II, as the terms having the same co-efficients may be either of opposite or the same sign.

Step IV : Solve the equations in one variable so obtained in Step III.

Step V : Substitute the value found in Step IV in any one of the given equations and then compute the value of the other variable.

Type I : Solving simultaneous linear equations in two variables

❖ EXAMPLES ❖

Ex.20 Solve the following system of linear equations by applying the method of elimination by equating the co-efficients :

$$(i) \quad 4x - 3y = 4 \quad (ii) \quad 5x - 6y = 8$$

$$2x + 4y = 3 \quad 3x + 2y = 6$$

Sol. (i) We have,

$$4x - 3y = 4 \quad \dots(1)$$

$$2x + 4y = 3 \quad \dots(2)$$

Let us decide to eliminate x from the given equation. Here, the co-efficients of x are 4 and 2 respectively. We find the L.C.M. of 4 and 2 is 4. Then, make the co-efficients of x equal to 4 in the two equations.

Multiplying equation (1) with 1 and equation (2) with 2, we get ;

$$4x - 3y = 4 \quad \dots(3)$$

$$4x + 8y = 6 \quad \dots(4)$$

Subtracting equation (4) from (3), we get ;

$$-11y = -2$$

$$\Rightarrow y = \frac{2}{11}$$

Substituting $y = 2/11$ in equation (1), we get;

$$4x - 3 \times \frac{2}{11} = 4$$

$$\Rightarrow 4x - \frac{6}{11} = 4$$

$$\Rightarrow 4x = 4 + \frac{6}{11}$$

$$\Rightarrow 4x = \frac{50}{11}$$

$$\Rightarrow x = \frac{50}{44} = \frac{25}{22}$$

Hence, solution of the given system of equation is :

$$x = \frac{25}{22}, \quad y = \frac{2}{11}$$

(ii) We have;

$$5x - 6y = 8 \quad \dots(1)$$

$$3x + 2y = 6 \quad \dots(2)$$

Let us eliminate y from the given system of equations. The co-efficients of y in the given equations are 6 and 2 respectively. The L.C.M. of 6 and 2 is 6. We have to make the both coefficients equal to 6. So, multiplying both sides of equation (1) with 1 and equation (2) with 3, we get ;

$$5x - 6y = 8 \quad \dots(3)$$

$$9x + 6y = 18 \quad \dots(4)$$

Adding equation (3) and (4), we get ;

$$14x = 26 \quad \Rightarrow \quad x = \frac{26}{14} = \frac{13}{7}$$

Putting $x = 13/7$ in equation (1), we get ;

$$5 \times \frac{13}{7} - 6y = 8 \quad \Rightarrow \quad \frac{65}{7} - 6y = 8$$

$$\Rightarrow 6y = \frac{65}{7} - 8 = \frac{65 - 56}{7} = \frac{9}{7}$$

$$\Rightarrow y = \frac{9}{42} = \frac{3}{14}$$

Hence, the solution of the system of equations

$$\text{is } x = \frac{13}{7}, \quad y = \frac{3}{14}$$

Ex.21 Solve the following system of equations by using the method of elimination by equating the co-efficients.

$$\frac{x}{2} + \frac{2y}{5} + 2 = 10; \quad \frac{2x}{7} - \frac{y}{2} + 1 = 9$$

Sol. The given system of equation is

$$\frac{x}{2} + \frac{2y}{5} + 2 = 10 \Rightarrow \frac{x}{2} + \frac{2y}{5} = 8 \quad \dots(1)$$

$$\frac{2x}{5} - \frac{y}{2} + 1 = 9 \Rightarrow \frac{2x}{5} - \frac{y}{2} = 8 \quad \dots(2)$$

The equation (1) can be expressed as :

$$\frac{5x + 4y}{10} = 8 \Rightarrow 5x + 4y = 80 \quad \dots(3)$$

Similarly, the equation (2) can be expressed as :

$$\frac{4x - 7y}{14} = 8 \Rightarrow 4x - 7y = 112 \quad \dots(4)$$

Now the new system of equations is

$$5x + 4y = 80 \quad \dots(5)$$

$$4x - 7y = 112 \quad \dots(6)$$

Now multiplying equation (5) by 4 and equation (6) by 5, we get ;

$$20x - 16y = 320 \quad \dots(7)$$

$$20x + 35y = 560 \quad \dots(8)$$

Subtracting equation (7) from (8), we get ;

$$y = \frac{-240}{51}$$

Putting $y = \frac{-240}{51}$ in equation (5), we get ;

$$5x + 4 \times \left(\frac{-240}{51} \right) = 80 \Rightarrow 5x - \frac{960}{51} = 80$$

$$\Rightarrow 5x = 80 + \frac{960}{51} = \frac{4080 + 960}{51} = \frac{5040}{51}$$

$$\Rightarrow x = \frac{5040}{255} = \frac{1008}{51} = \frac{336}{17} \Rightarrow x = \frac{336}{17}$$

Hence, the solution of the system of equations is, $x = \frac{336}{17}, y = \frac{-80}{17}$.

Ex.22 Solve the following system of linear equations by using the method of elimination by equating the coefficients :

$$3x + 4y = 25; \quad 5x - 6y = -9$$

Sol. The given system of equations is

$$3x + 4y = 25 \quad \dots(1)$$

$$5x - 6y = -9 \quad \dots(2)$$

Let us eliminate y . The coefficients of y are 4 and -6. The LCM of 4 and 6 is 12.

So, we make the coefficients of y as 12 and -12.

Multiplying equation (1) by 3 and equation (2) by 2, we get

$$9x + 12y = 75 \quad \dots(3)$$

$$10x - 12y = -18 \quad \dots(4)$$

Adding equation (3) and equation (4), we get

$$19x = 57 \quad \Rightarrow \quad x = 3.$$

Putting $x = 3$ in (1), we get,

$$3 \times 3 + 4y = 25$$

$$\Rightarrow 4y = 25 - 9 = 16 \Rightarrow y = 4$$

Hence, the solution is $x = 3, y = 4$.

Verification : Both the equations are satisfied by $x = 3$ and $y = 4$, which shows that the solution is correct.

Ex.23 Solve the following system of equations :

$$15x + 4y = 61; 4x + 15y = 72$$

Sol. The given system of equation is

$$15x + 4y = 61 \quad \dots(1)$$

$$4x + 15y = 72 \quad \dots(2)$$

Let us eliminate y . The coefficients of y are 4 and 15. The L.C.M. of 4 and 15 is 60. So, we make the coefficients of y as 60. Multiplying (1) by 15 and (2) by 4, we get

$$225x + 60y = 915 \quad \dots(3)$$

$$16x + 60y = 288 \quad \dots(4)$$

Subtracting (4) from (3), we get

$$209x = 627 \quad \Rightarrow x = \frac{627}{209} = 3$$

Putting $x = 3$ in (1), we get

$$15 \times 3 + 4y = 61 \Rightarrow 45 + 4y = 61$$

$$\Rightarrow 4y = 61 - 45 = 16 \Rightarrow y = \frac{16}{4} = 4$$

Hence, the solution is $x = 3, y = 4$.

Verification : On putting $x = 3$ and $y = 4$ in the given equations, they are satisfied. Hence, the solution is correct.

Ex.24 Solve the following system of linear equations by using the method of elimination by equating the coefficients

$$\sqrt{3}x - \sqrt{2}y = \sqrt{3}; \sqrt{5}x + \sqrt{3}y = \sqrt{2}$$

Sol. The given equations are

$$\sqrt{3}x - \sqrt{2}y = \sqrt{3} \quad \dots(1)$$

$$\sqrt{5}x + \sqrt{3}y = \sqrt{2} \quad \dots(2)$$

Let us eliminate y . To make the coefficients of equal, we multiply the equation (1) by $\sqrt{3}$ and equation (2) by $\sqrt{2}$ to get

$$3x - \sqrt{6}y = 3 \quad \dots(3)$$

$$\sqrt{10}x + \sqrt{6}y = 2 \quad \dots(4)$$

Adding equation (3) and equation (4), we get

$$3x + \sqrt{10}x = 5 \Rightarrow (3 + \sqrt{10})x = 5$$

$$\begin{aligned} \Rightarrow x &= \frac{5}{3 + \sqrt{10}} = \left(\frac{5}{\sqrt{10} + 3} \right) \times \left(\frac{\sqrt{10} - 3}{\sqrt{10} - 3} \right) \\ &= \frac{5(\sqrt{10} - 3)}{10 - 9} = 5(-3) \end{aligned}$$

Putting $x = 5(\sqrt{10} - 3)$ in (1) we get

$$\sqrt{3} \times 5(\sqrt{10} - 3) - \sqrt{2}y = \sqrt{3}$$

$$\Rightarrow 5\sqrt{30} - 15\sqrt{3} - \sqrt{2}y = \sqrt{3}$$

$$\Rightarrow \sqrt{2}y = 5\sqrt{30} - 15\sqrt{3} - \sqrt{3}$$

$$\Rightarrow \sqrt{2}y = 5\sqrt{30} - 16\sqrt{3}$$

$$\Rightarrow y = \frac{5\sqrt{30}}{\sqrt{2}} - \frac{16\sqrt{3}}{\sqrt{2}} = 5\sqrt{15} - 8\sqrt{6}$$

Hence, the solution is $x = 5(\sqrt{10} - 3)$ and $y = 5\sqrt{15} - 8\sqrt{6}$.

Verification : After verifying, we find the solution is correct.

Ex.25 Solve for x and y :

$$\frac{ax}{b} - \frac{by}{a} = a + b; ax - by = 2ab$$

Sol. The given system of equations is

$$\frac{ax}{b} - \frac{by}{a} = a + b \quad \dots(1)$$

$$ax - by = 2ab \quad \dots(2)$$

Dividing (2) by a , we get

$$x - \frac{by}{a} = 2b \quad \dots(3)$$

On subtracting (3) from (1), we get

$$\frac{ax}{b} - x = a - b \Rightarrow x \left(\frac{a}{b} - 1 \right) = a - b$$

$$\Rightarrow x = \frac{(a - b)b}{a - b} = b \Rightarrow x = b$$

On substituting the value of x in (3), we get

$$b - \frac{by}{a} = 2b \Rightarrow b \left(1 - \frac{y}{a} \right) = 2b$$

$$\Rightarrow 1 - \frac{y}{a} = 2 \Rightarrow \frac{y}{a} = 1 - 2$$

$$\Rightarrow \frac{y}{a} = -1 \Rightarrow y = -a$$

Hence, the solution of the equations is

$$x = b, y = -a$$

Ex.26 Solve the following system of linear equations :

$$2(ax - by) + (a + 4b) = 0$$

$$2(bx + ay) + (b - 4a) = 0$$

Sol. $2ax - 2by + a + 4b = 0$ (1)

$$2bx + 2ay + b - 4a = 0$$
 (2)

Multiplying (1) by b and (2) by a and subtracting, we get

$$2(b^2 + a^2)y = 4(a^2 + b^2) \Rightarrow y = 2$$

Multiplying (1) by a and (2) by b and adding, we get

$$2(a^2 + b^2)x + a^2 + b^2 = 0$$

$$\Rightarrow 2(a^2 + b^2)x = -(a^2 + b^2) \Rightarrow x = -\frac{1}{2}$$

Hence $x = -1/2$, and $y = 2$

Ex.27 Solve $(a - b)x + (a + b)y = a^2 - 2ab - b^2$

$$(a + b)(x + y) = a^2 + b^2$$

Sol. The given system of equation is

$$(a - b)x + (a + b)y = a^2 - 2ab - b^2$$
(1)

$$(a + b)(x + y) = a^2 + b^2$$
(2)

$$\Rightarrow (a + b)x + (a + b)y = a^2 + b^2$$
(3)

Subtracting equation (3) from equation (1), we get

$$(a - b)x - (a + b)x = (a^2 - 2ab - b^2) - (a^2 + b^2)$$

$$\Rightarrow -2bx = -2ab - 2b^2$$

$$\Rightarrow x = \frac{-2ab}{-2b} - \frac{2b^2}{-2b} = a + b$$

Putting the value of x in (1), we get

$$(a - b)(a + b) + (a + b)y = a^2 - 2ab - b^2$$

$$\Rightarrow (a + b)y = a^2 - 2ab - b^2 - (a^2 - b^2)$$

$$\Rightarrow (a + b)y = -2ab$$

$$\Rightarrow y = \frac{-2ab}{a + b}$$

\Rightarrow Hence, the solution is $x = a + b$,

$$y = \frac{-2ab}{a + b}$$

Type II : Solving a system of equations which is reducible to a system of simultaneous linear equations

❖ **EXAMPLES** ❖

Ex.28 Solve the following system of equations

$$\frac{1}{2x} - \frac{1}{y} = -1; \quad \frac{1}{x} + \frac{1}{2y} = 8$$

Sol. We have ;

$$\frac{1}{2x} - \frac{1}{y} = -1$$
(1)

$$\frac{1}{x} + \frac{1}{2y} = 8$$
(2)

Let us consider $1/x = u$ and $1/y = v$.

Putting $1/x = u$ and $1/y = v$ in the above equations, we get;

$$\frac{u}{2} - v = -1$$
(3)

$$u + \frac{v}{2} = 8$$
(4)

Let us eliminate v from the system of equations. So, multiplying equation (3) with 1/2 and (4) with 1, we get ;

$$\frac{u}{4} - \frac{v}{2} = -\frac{1}{2}$$
(5)

$$u + \frac{v}{2} = 8$$
(6)

Adding equation (5) and (6), we get ;

$$\frac{u}{4} + u = \frac{-1}{2} + 8$$

$$\Rightarrow \frac{5u}{4} = \frac{15}{2}$$

$$\Rightarrow u = \frac{15}{2} \times \frac{4}{5}$$

$$\Rightarrow u = 6$$

We know,

$$\frac{1}{x} = u \Rightarrow \frac{1}{x} = 6$$

$$\Rightarrow x = \frac{1}{6}$$

Putting $1/x = 6$ in equation (2), we get ;

$$6 + \frac{1}{2y} = 8 \Rightarrow \frac{1}{2y} = 2$$

$$\Rightarrow \frac{1}{y} = 4 \Rightarrow y = \frac{1}{4}$$

Hence, the solution of the system is,

$$x = \frac{1}{6}, y = \frac{1}{4}$$

Ex.29 Solve,

$$\frac{2}{x} + \frac{1}{3y} = \frac{1}{5}; \quad \frac{3}{x} + \frac{2}{3y} = 2$$

and also find 'a' for which $y = ax - 2$.

Sol. Considering $1/x = u$ and $1/y = v$, the given system of equations becomes

$$2u + \frac{v}{3} = \frac{1}{5}$$

$$\Rightarrow \frac{6u + v}{3} = \frac{1}{5}$$

$$\Rightarrow 30u + 5v = 3 \quad \dots(1)$$

$$3u + \frac{2v}{3} = 2 \Rightarrow 9u + 2v = 6 \quad \dots(2)$$

Multiplying equation (1) with 2 and equation (2) with 5, we get ;

$$60u + 10v = 6 \quad \dots(3)$$

$$45u + 10v = 30 \quad \dots(4)$$

Subtracting equation (4) from equation (3), we get ;

$$15u = -24$$

$$\Rightarrow u = \frac{-24}{15} = \frac{-8}{5}$$

Putting $u = \frac{-8}{5}$ in equation (2), we get;

$$9 \times \left(\frac{-8}{5}\right) + 2v = 6$$

$$\Rightarrow \frac{-72}{5} + 2v = 6$$

$$\Rightarrow 2v = 6 + \frac{72}{5} = \frac{102}{5}$$

$$\Rightarrow v = \frac{102}{2 \times 5} = \frac{51}{5}$$

Here $\frac{1}{x} = u = -\frac{8}{5}$

$$\Rightarrow x = -\frac{5}{8}$$

And, $\frac{1}{y} = v = \frac{51}{5} \Rightarrow y = \frac{5}{51}$

Putting $x = -\frac{5}{8}$ and $y = \frac{5}{51}$ in $y = ax - 2$, we get;

$$\frac{5}{51} = \frac{-5a}{8} - 2$$

$$\Rightarrow \frac{5a}{8} = -2 - \frac{5}{51} = \frac{-102 - 5}{51} = \frac{-107}{51}$$

$$\Rightarrow a = \frac{-107}{51} \times \frac{8}{5} = \frac{-856}{255} \Rightarrow a = \frac{-856}{255}$$

Ex.30 Solve,

$$\frac{2}{x+2y} + \frac{6}{2x-y} = 4$$

$$\frac{5}{2(x+2y)} + \frac{1}{3(2x-y)} = 1$$

where, $x + 2y \neq 0$ and $2x - y \neq 0$

Sol. Taking $\frac{1}{x+2y} = u$ and $\frac{1}{2x-y} = v$, the above system of equations becomes

$$2u + 6v = 4 \quad \dots(1)$$

$$\frac{5u}{2} + \frac{v}{3} = 1 \quad \dots(2)$$

Multiplying equation (2) by 18, we have;

$$45u + 6v = 18 \quad \dots(3)$$

Now, subtracting equation (3) from equation (1), we get ;

$$-43u = -14 \Rightarrow u = \frac{14}{43}$$

Putting $u = 14/43$ in equation (1), we get

$$2 \times \frac{14}{43} + 6v = 4$$

$$\Rightarrow 6v = 4 - \frac{28}{43} = \frac{172 - 28}{43} \Rightarrow v = \frac{144}{43}$$

Now, $u = \frac{14}{43} = \frac{1}{x+2y}$

$$\Rightarrow 14x + 28y = 43 \quad \dots(4)$$

And, $v = \frac{144}{43} = \frac{1}{2x-y}$

$$\Rightarrow 288x - 144y = 43 \quad \dots(5)$$

Multiplying equation (4) by 288 and (5) by 14, the system of equations becomes

$$288 \times 14x + 28y \times 288 = 43 \times 288$$

$$288x \times 14 - 144y \times 14 = 43 \times 4$$

$$\Rightarrow 4022x + 8064y = 12384 \quad \dots(6)$$

$$4022x - 2016y = 602 \quad \dots(7)$$

Subtracting equation (7) from (6), we get;

$$10080y = 11782 \Rightarrow y = 1.6(\text{approx})$$

Now, putting 1.6 in (4), we get,

$$14x + 28 \times 1.6 = 63$$

$$\Rightarrow 14x + 44.8 = 63 \Rightarrow 14x = 18.2$$

$$\Rightarrow x = \frac{18.2}{14} = 1.3 \text{ (approx)}$$

Thus, solution of the given system of equation is $x = 1.3$ (approx), $y = 1.6$ (approx).

$$x = \frac{45}{16}, \quad y = \frac{-35}{16}$$

Type-III : Equation of the form,

$$ax + by = c \text{ and } bx + ay = d \text{ where } a \neq b.$$

Ex.31 Solve,

$$\frac{1}{x+y} + \frac{2}{x-y} = 2$$

$$\frac{2}{x+y} - \frac{1}{x-y} = 3$$

where $x + y \neq 0$ and $x - y \neq 0$

Sol. Taking $\frac{1}{x+y} = u$ and $\frac{1}{x-y} = v$ the above system of equations becomes

$$u + 2v = 2 \quad \dots(1)$$

$$2u - v = 3 \quad \dots(2)$$

Multiplying equation (1) by 2, and (2) by 1, we get;

$$2u + 4v = 4 \quad \dots(3)$$

$$2u - v = 3 \quad \dots(4)$$

Subtracting equation (4) from (3), we get;

$$5v = 1 \Rightarrow v = \frac{1}{5}$$

Putting $v = 1/5$ in equation (1), we get;

$$u + 2 \times \frac{1}{5} = 2 \Rightarrow u = 2 - \frac{2}{5} = \frac{8}{5}$$

$$\text{Here, } u = \frac{8}{5} = \frac{1}{x+y} \Rightarrow 8x + 8y = 5 \quad \dots(5)$$

$$\text{And, } v = \frac{1}{5} = \frac{1}{x-y} \Rightarrow x - y = 5 \quad \dots(6)$$

Multiplying equation (5) with 1, and (6) with 8, we get;

$$8x + 8y = 5 \quad \dots(7)$$

$$8x - 8y = 40 \quad \dots(8)$$

Adding equation (7) and (8), we get;

$$16x = 45 \Rightarrow x = \frac{45}{16}$$

Now, putting the above value of x in equation (6), we get;

$$\frac{45}{16} - y = 5 \Rightarrow y = \frac{45}{16} - 5 = \frac{-35}{16}$$

Hence, solution of the system of the given equations is ;

We may use the following method to solve the above type of equations.

Steps :

Step I : Let us write the equations in the form

$$ax + by = c$$

$$bx + ay = d$$

Step II : Adding and subtracting the above type of two equations, we find :

$$(a + b)x + (a + b)y = c + d$$

$$\Rightarrow x + y = \frac{c + d}{a + b} \quad \dots(1)$$

$$(a - b)x - (a - b)y = c - d$$

$$\Rightarrow x - y = \frac{c - d}{a - b} \quad \dots(2)$$

Step III : We get the values of x and y after adding or subtracting the equations (1) and (2).

❖ **EXAMPLES** ❖

Ex.32 Solve the following equations.

$$156x + 112y = 580; \quad 112x + 156y = 492$$

Sol. The given system of equation is

$$156x + 112y = 580 \quad \dots(1)$$

$$112x + 156y = 492 \quad \dots(2)$$

Adding equation (1) and (2) we get ;

$$268x + 268y = 1072$$

$$\Rightarrow 268(x + y) = 1072$$

$$\Rightarrow x + y = 4 \quad \dots(3)$$

Subtracting equation (2) from equation (1), we get

$$44x - 44y = 88$$

$$x - y = 2 \quad \dots(4)$$

Adding equation (3) with equation (4), we get;

$$2x = 6 \Rightarrow x = 3$$

Putting $x = 3$ in equation (3), we get;

$$y = 1$$

Thus, solution of the system of equations is

$$x = 3, y = 1$$

Ex.33 Solve the following system of equations.

$$43x + 35y = 207; \quad 35x + 43y = 183$$

Sol. The given system of equations is ;
 $43x + 35y = 207$ (1)
 $35x + 43y = 183$ (2)
 Adding equation (1) and (2), we get;
 $78x + 78y = 390$
 $\Rightarrow 78(x + y) = 390$
 $\Rightarrow x + y = 5$ (3)
 Subtracting equation (2) from the equation (1), we get ;
 $8x - 8y = 24$
 $\Rightarrow x - y = 3$ (4)
 Adding equation (3) and (4), we get;
 $2x = 8 \Rightarrow x = 4$
 Putting $x = 4$ in equation (3), we get;
 $4 + y = 5 \Rightarrow y = 1$
 Hence, the solution of the system of equation is ; $x = 4, y = 1$.

Type IV : Equation of the form,
 $a_1x + b_1y + c_1z = d_1$
 $a_2x + b_2y + c_2z = d_2$
 $a_3x + b_3y + c_3z = d_3$

We may use the following method to solve the above type of equations.

Steps :

- Step I :** Consider any one of the three given equations.
- Step II :** Find the value of one of the variable, say z , from it.
- Step III :** Substitute the value of z found in Step II in the other two equations to get two linear equations in x, y .
- Step IV :** Taking the help of elimination method, solve the equations in x, y obtained in Step III.
- Step V :** Substitute the values of x, y found in Step IV and Step II to get the value of z .

❖ **EXAMPLES** ❖

Ex.34 Solve the following system of equations.

$$\begin{aligned} x - z &= 5 \\ y + z &= 3 \end{aligned}$$

Sol. The given system of equations to ;
 $x - y = 2$
 $x - z = 5$ (1)
 $y + z = 3$ (2)
 $x - y = 2$ (3)

From equation (1), we have;

$$z = x - 5$$

Putting $z = x - 5$ in equation (2), we get ;

$$y + x - 5 = 3$$

$$\Rightarrow x + y = 8 \quad \dots(4)$$

Adding equations (3) and (4), we get;

$$2x = 10$$

$$\Rightarrow x = 5$$

Again putting $x = 5$ in equation (1), we get;

$$5 - z = 5$$

$$\Rightarrow z = 0$$

Hence, the solution of the given system of equation is $x = 5, y = 3, z = 0$.

Other method :

adding (1), (2) & (3)

$$2x = 10$$

$$x = 5$$

now put this value in equation (1) & (3), we get $z = 0, y = 3$ respectively

Ex.35 Solve,

$$x + 2y + z = 12$$

$$2x - z = 4$$

$$x - 2y = 4$$

Sol. We have,

$$x + 2y + z = 12 \quad \dots(1)$$

$$2x - z = 4 \quad \dots(2)$$

$$x - 2y = 4 \quad \dots(3)$$

From equation (1), we have $z = 12 - x - 2y$.

Putting, $z = 12 - x - 2y$ in the equation (2), we get;

$$2x - (12 - x - 2y) = 4$$

$$\Rightarrow 2x - 12 + x + 2y = 4$$

$$\Rightarrow 3x + 2y = 16 \quad \dots(4)$$

Adding equations (3) and (4), we get;

$$4x = 20$$

$$\Rightarrow x = 5$$

Putting the value of $x = 5$ in equation (2), we get

$$2 \times 5 - z = 4$$

$$\Rightarrow z = 10 - 4 = 6$$

Again putting the value of $x = 5$ in equation (3), we get

$$5 - 2y = 4 \Rightarrow y = 1/2$$

Hence, the solution of the given system of equations is ;

$$x = 5, y = 1/2, z = 6$$

➤ CROSS-MULTIPLICATION METHOD

By the method of elimination by substitution, only those equations can be solved, which have unique solution. But the method of cross multiplication discussed below is applicable in all the cases; whether the system has a unique solution, no solution or infinitely many solutions.

Let us solve the following system of equations

$$a_1x + b_1y + c_1 = 0 \quad \dots(1)$$

$$a_2x + b_2y + c_2 = 0 \quad \dots(2)$$

Multiplying equation (1) by b_2 and equation (2) by b_1 , we get

$$a_1b_2x + b_1b_2y + b_2c_1 = 0 \quad \dots(3)$$

$$a_2b_1x + b_1b_2y + b_1c_2 = 0 \quad \dots(4)$$

Subtracting equation (4) from equation (3), we get

$$(a_1b_2 - a_2b_1)x + (b_2c_1 - b_1c_2) = 0$$

$$\Rightarrow x = \frac{b_1c_2 - b_2c_1}{a_1b_2 - a_2b_1}$$

$$\left[\begin{array}{l} a_1b_2 - a_2b_1 \neq 0 \\ \frac{a_1}{a_2} \neq \frac{b_1}{b_2} \end{array} \right]$$

Similarly, $y = \frac{c_1a_2 - c_2a_1}{a_1b_2 - a_2b_1}$

These values of x and y can also be written as

$$\frac{x}{b_1c_2 - b_2c_1} = \frac{-y}{a_1c_2 - a_2c_1} = \frac{1}{a_1b_2 - a_2b_1}$$

❖ EXAMPLES ❖

Ex.36 Solve the following system of equations by cross-multiplication method.

$$2x + 3y + 8 = 0$$

$$4x + 5y + 14 = 0$$

Sol. The given system of equations is

$$2x + 3y + 8 = 0$$

$$4x + 5y + 14 = 0$$

By cross-multiplication, we get

$$\frac{x}{3 \times 8 - 5 \times 14} = \frac{-y}{2 \times 8 - 4 \times 14} = \frac{1}{2 \times 3 - 4 \times 5}$$

$$\Rightarrow \frac{x}{3 \times 14 - 5 \times 8} = \frac{-y}{2 \times 14 - 4 \times 8} = \frac{1}{2 \times 5 - 4 \times 3}$$

$$\Rightarrow \frac{x}{42 - 40} = \frac{-y}{28 - 32} = \frac{1}{10 - 12}$$

$$\Rightarrow \frac{x}{2} = \frac{-y}{-4} = \frac{1}{-2}$$

$$\Rightarrow \frac{x}{2} = -\frac{1}{2}$$

$$\Rightarrow x = -1$$

$$\text{and } \frac{-y}{-4} = -\frac{1}{2} \Rightarrow y = -2.$$

Hence, the solution is $x = -1, y = -2$

We can verify the solution.

Ex.37 Solve the following system of equations by the method of cross-multiplication.

$$2x - 6y + 10 = 0$$

$$3x - 7y + 13 = 0$$

Sol. The given system of equations is

$$2x - 6y + 10 = 0 \quad \dots(1)$$

$$3x - 7y + 13 = 0 \quad \dots(2)$$

By cross-multiplication, we have

$$\frac{x}{-6 \times 10 - 7 \times 13} = \frac{-y}{2 \times 10 - 3 \times 13} = \frac{1}{2 \times -6 - 3 \times -7}$$

$$\Rightarrow \frac{x}{-6 \times 13 - (-7) \times 10} = \frac{-y}{2 \times 13 - 3 \times 10}$$

$$= \frac{1}{2 \times (-7) - 3 \times (-6)}$$

$$\Rightarrow \frac{x}{-78 + 70} = \frac{-y}{26 - 30} = \frac{1}{-14 + 18}$$

$$\Rightarrow \frac{x}{-8} = \frac{-y}{-4} = \frac{1}{4}$$

$$\Rightarrow \frac{x}{-8} = \frac{1}{4}$$

$$\Rightarrow x = -2$$

$$\Rightarrow \frac{-y}{-4} = \frac{1}{4}$$

$$\Rightarrow y = 1$$

Hence, the solution is $x = -2, y = 1$

Ex.38 Solve the following system of equations by the method of cross-multiplication.

$$11x + 15y = -23; 7x - 2y = 20$$

Sol. The given system of equations is

$$11x + 15y + 23 = 0$$

$$7x - 2y - 20 = 0$$

Now, by cross-multiplication method, we have

$$\frac{x}{15 \times (-20) - (-2) \times 23} = \frac{-y}{11 \times (-20) - 7 \times 23} = \frac{1}{11 \times (-20) - 7 \times 23}$$

$$\Rightarrow \frac{x}{-300 + 46} = \frac{-y}{-220 - 161} = \frac{1}{-22 - 105}$$

$$= \frac{1}{-11 \times (-2) - 7 \times 15}$$

$$\Rightarrow \frac{x}{-254} = \frac{-y}{-381} = \frac{1}{-127}$$

$$\Rightarrow \frac{x}{-254} = \frac{-y}{-381} = \frac{1}{-127}$$

$$\Rightarrow \frac{x}{-254} = \frac{1}{-127} \Rightarrow x = 2$$

$$\text{and } \frac{-y}{-381} = \frac{1}{-127} \Rightarrow y = -3$$

Hence, $x = 2, y = -3$ is the required solution.

❖ EXAMPLES ❖

Ex.46 Show that the following system of equations has unique solution

$$2x - 3y = 6; x + y = 1.$$

Sol. The given system of equation can be written as

$$2x - 3y - 6 = 0$$

$$x + y - 1 = 0$$

The given equations are of the form

$$a_1x + b_1y + c_1 = 0$$

$$a_2x + b_2y + c_2 = 0$$

Where, $a_1 = 2, b_1 = -3, c_1 = -6$

and $a_2 = 1, b_2 = 1, c_2 = -1$

$$\frac{a_1}{a_2} = \frac{2}{1} = 2, \frac{b_1}{b_2} = \frac{-3}{1} = -3$$

$$\frac{c_1}{c_2} = \frac{-6}{-1} = 6$$

Clearly, $\frac{a_1}{a_2} \neq \frac{b_1}{b_2}$

So, the given system of equations has a unique solution. i.e., it is consistent.

Ex.47 Show that the following system of equations has unique solution :

$$x - 2y = 2; 4x - 2y = 5$$

Sol. The given system of equations can be written as

$$x - 2y - 2 = 0$$

$$4x - 2y - 5 = 0$$

The given equations are of the form

$$a_1x + b_1y + c_1 = 0$$

$$a_2x + b_2y + c_2 = 0$$

Where, $a_1 = 1, b_1 = -2, c_1 = -2$

and $a_2 = 4, b_2 = -2, c_2 = -5$

$$\frac{a_1}{a_2} = \frac{1}{4}, \frac{b_1}{b_2} = \frac{-2}{-2} = 1, \frac{c_1}{c_2} = \frac{-2}{-5} = \frac{2}{5}$$

Clearly, $\frac{a_1}{a_2} \neq \frac{b_1}{b_2}$

So, the given system of equations has a unique solution i.e. It is consistent.

Ex.48 For what value of k the following system of equations has a unique solution :

$$x - ky = 2; 3x + 2y = -5$$

Sol. The given system of equation can be written as

The system of equations is given by

$$a_1x + b_1y + c_1 = 0 \quad \dots(1)$$

$$a_2x + b_2y + c_2 = 0 \quad \dots(2)$$

(a) It is consistent with unique solution, if

$$\frac{a_1}{a_2} \neq \frac{b_1}{b_2}$$

It shows that lines represented by equations (1) and (2) are not parallel.

(b) It is consistent with infinitely many solutions, if

$$\frac{a_1}{a_2} = \frac{b_1}{b_2} = \frac{c_1}{c_2}$$

It shows that lines represented by equation (1) and (2) are coincident.

(c) It is inconsistent, if

$$\frac{a_1}{a_2} = \frac{b_1}{b_2} \neq \frac{c_1}{c_2}$$

It shows that lines represented by equation (1) and (2) are parallel and non-coincident.

$$\begin{aligned}x - ky - 2 &= 0 \\3x + 2y + 5 &= 0\end{aligned}$$

The given system of equations is of the form

$$\begin{aligned}a_1x + b_1y + c_1 &= 0 \\a_2x + b_2y + c_2 &= 0\end{aligned}$$

where, $a_1 = 1$, $b_1 = -k$, $c_1 = -2$

and $a_2 = 3$, $b_2 = 2$, $c_2 = 5$

Clearly, for unique solution $\frac{a_1}{a_2} \neq \frac{b_1}{b_2}$

$$\Rightarrow \frac{1}{3} \neq \frac{-k}{2} \Rightarrow k \neq \frac{-2}{3}$$

Ex.49 Show that the following system has infinitely many solutions.

$$x = 3y + 3; \quad 9y = 3x - 9$$

Sol. The given system of equations can be written as

$$\begin{aligned}x - 3y - 3 &= 0 \\3x - 9y - 9 &= 0\end{aligned}$$

The given equations are of the form

$$\begin{aligned}a_1x + b_1y + c_1 &= 0 \\a_2x + b_2y + c_2 &= 0\end{aligned}$$

Where, $a_1 = 1$, $b_1 = -3$, $c_1 = -3$

and $a_2 = 3$, $b_2 = -9$, $c_2 = -9$

$$\frac{a_1}{a_2} = \frac{1}{3}, \frac{b_1}{b_2} = \frac{-3}{-9} = \frac{1}{3}, \frac{c_1}{c_2} = \frac{-3}{-9} = \frac{1}{3}$$

Clearly, $\frac{a_1}{a_2} = \frac{b_1}{b_2} = \frac{c_1}{c_2}$ so the given system of equations has infinitely many solutions.

Ex.50 Show that the following system has infinitely many solutions :

$$2y = 4x - 6; \quad 2x = y + 3$$

Sol. The given system of equations can be written as

$$\begin{aligned}4x - 2y - 6 &= 0 \\2x - y - 3 &= 0\end{aligned}$$

The given equations are of the form

$$\begin{aligned}a_1x + b_1y + c_1 &= 0 \\a_2x + b_2y + c_2 &= 0\end{aligned}$$

Where, $a_1 = 4$, $b_1 = -2$, $c_1 = -6$

and $a_2 = 2$, $b_2 = -1$, $c_2 = -3$

$$\frac{a_1}{a_2} = \frac{4}{2} = 2, \frac{b_1}{b_2} = \frac{-2}{-1} = 2, \frac{c_1}{c_2} = \frac{-6}{-3} = 2$$

Clearly, $\frac{a_1}{a_2} = \frac{b_1}{b_2} = \frac{c_1}{c_2}$, so the given system of equations has infinitely many solutions.

Ex.51 Find the value of k for which the following system of equations has infinitely many solutions.

$$(k - 1)x + 3y = 7; \quad (k + 1)x + 6y = (5k - 1)$$

Sol. The given system of equations can be written as

$$\begin{aligned}(k - 1)x + 3y - 7 &= 0 \\(k + 1)x + 6y - (5k - 1) &= 0\end{aligned}$$

Here $a_1 = (k - 1)$, $b_1 = 3$, $c_1 = -7$

and $a_2 = (k + 1)$, $b_2 = 6$, $c_2 = -(5k - 1)$

For the system of equations to have infinite number of solutions.

$$\begin{aligned}\frac{a_1}{a_2} &= \frac{b_1}{b_2} = \frac{c_1}{c_2} \\ \Rightarrow \frac{k - 1}{k + 1} &= \frac{3}{6} = \frac{-7}{-(5k - 1)}\end{aligned}$$

$$\Rightarrow \frac{k - 1}{k + 1} = \frac{1}{2} = \frac{7}{5k - 1}$$

Taking I and II

$$\begin{aligned}\frac{k - 1}{k + 1} &= \frac{1}{2} \\ \Rightarrow 2k - 2 &= k + 1 \Rightarrow k = 3\end{aligned}$$

Taking II and III

$$\frac{1}{2} = \frac{7}{5k - 1} \Rightarrow 5k - 1 = 14$$

$$\Rightarrow 5k = 15 \Rightarrow k = 3$$

Hence, $k = 3$.

Ex.52 For what values of a and b , the following system of equations have an infinite number of solutions:

$$2x + 3y = 7; \quad (a - b)x + (a + b)y = 3a + b - 2$$

Sol. The given system of linear equations can be written as

$$\begin{aligned}2x + 3y - 7 &= 0 \\(a - b)x + (a + b)y - (3a + b - 2) &= 0\end{aligned}$$

The above system of equations is of the form

$$\begin{aligned}a_1x + b_1y + c_1 &= 0 \\a_2x + b_2y + c_2 &= 0,\end{aligned}$$

where $a_1 = 2$, $b_1 = 3$, $c_1 = -7$

$$a_2 = (a - b), \quad b_2 = (a + b), \quad c_2 = -(3a + b - 2)$$

For the given system of equations to have an infinite number of solutions

$$\frac{a_1}{a_2} = \frac{b_1}{b_2} = \frac{c_1}{c_2}$$

Here, $\frac{a_1}{a_2} = \frac{2}{a-b}, \frac{b_1}{b_2} = \frac{3}{a+b}$ and

$$\frac{c_1}{c_2} = \frac{-7}{-(3a+b-2)} = \frac{7}{3a+b-2}$$

$$\Rightarrow \frac{2}{a-b} = \frac{3}{a+b} = \frac{7}{3a+b-2}$$

$$\Rightarrow \frac{2}{a-b} = \frac{3}{a+b} \text{ and } \frac{3}{a+b} = \frac{7}{3a+b-2}$$

$$\Rightarrow 2a + 2b = 3a - 3b \text{ and } 9a + 3b - 6 = 7a + 7b$$

$$\Rightarrow 2a - 3a = -3b - 2b \text{ and } 9a - 7a = 7b - 3b + 6$$

$$\Rightarrow -a = -5b \text{ and } 2a = 4b + 6$$

$$\Rightarrow a = 5b \dots (3) \text{ and } a = 2b + 3 \dots (4)$$

Solving (3) and (4) we get

$$5b = 2b + 3 \Rightarrow b = 1$$

Substituting $b = 1$ in (3), we get $a = 5 \times 1 = 5$

Thus, $a = 5$ and $b = 1$

Hence, the given system of equations has infinite number of solutions when

$$a = 5, b = 1$$

Ex.53 Show that the following system of equations is inconsistent.

$$2x + 7y = 11; \quad 5x + \frac{35}{2}y = 25$$

Sol. The given system of equations can be written as

$$2x + 7y - 11 = 0$$

$$5x + \frac{35}{2}y - 25 = 0$$

The given equations are of the form

$$a_1x + b_1y + c_1 = 0$$

$$a_2x + b_2y + c_2 = 0$$

Where, $a_1 = 2, \quad b_1 = 7, \quad c_1 = -11$

and $a_2 = 5, \quad b_2 = \frac{35}{2}, \quad c_2 = -25$

$$\frac{a_1}{a_2} = \frac{2}{5}, \quad \frac{b_1}{b_2} = \frac{7}{\frac{35}{2}} = \frac{2}{5}, \quad \frac{c_1}{c_2} = \frac{-11}{-25} = \frac{11}{25}$$

$$\text{Clearly, } \frac{a_1}{a_2} = \frac{b_1}{b_2} \neq \frac{c_1}{c_2}$$

So, the given system of equations has no solution, i.e. it is inconsistent. **Proved.**

Ex.54 Show that the following system of equations has no solution :

$$2x + 4y = 10; \quad 3x + 6y = 12$$

Sol. The given system of equations can be written as

$$2x + 4y - 10 = 0$$

$$3x + 6y - 12 = 0$$

The given equations are of the form

$$a_1x + b_1y + c_1 = 0$$

$$a_2x + b_2y + c_2 = 0$$

Where $a_1 = 2, \quad b_1 = 4, \quad c_1 = -10$

and $a_2 = 3, \quad b_2 = 6, \quad c_2 = -12$

$$\frac{a_1}{a_2} = \frac{2}{3}, \quad \frac{b_1}{b_2} = \frac{4}{6} = \frac{2}{3}, \quad \frac{c_1}{c_2} = \frac{-10}{-12} = \frac{5}{6}$$

$$\text{Clearly, } \frac{a_1}{a_2} = \frac{b_1}{b_2} \neq \frac{c_1}{c_2}$$

So, the given system of equations has no solution, i.e., it is inconsistent. **Proved.**

Ex.55 For what values of k will the following system of linear equations has no solution.

$$3x + y = 1; \quad (2k - 1)x + (k - 1)y = 2k + 1$$

Sol. The given system of equations may be written as

$$3x + y - 1 = 0$$

$$(2k - 1)x + (k - 1)y - (2k + 1) = 0$$

The above system of equations is of the form

$$a_1x + b_1y + c_1 = 0$$

$$a_2x + b_2y + c_2 = 0$$

where $a_1 = 3, \quad b_1 = 1, \quad c_1 = -1$

and $a_2 = (2k - 1), \quad b_2 = (k - 1), \quad c_2 = -(2k + 1)$

$$\frac{a_1}{a_2} = \frac{3}{2k-1}, \quad \frac{b_1}{b_2} = \frac{1}{k-1}, \quad \frac{c_1}{c_2} = \frac{-1}{-(2k+1)}$$

$$\text{Clearly, for no solution } \frac{a_1}{a_2} = \frac{b_1}{b_2} \neq \frac{c_1}{c_2}$$

$$\Rightarrow \frac{3}{2k-1} = \frac{1}{k-1}$$

$$\Rightarrow 3k - 3 = 2k - 1$$

$$\Rightarrow k = 2$$

$$\text{and } \frac{1}{k-1} \neq \frac{-1}{-(2k+1)}$$

$$\Rightarrow 2k + 1 \neq k - 1$$

$$\Rightarrow k \neq -2$$

$$\text{and } \frac{3}{2k-1} \neq \frac{1}{2k+1}$$

$$\Rightarrow 6k + 3 \neq 2k - 1$$

$$\Rightarrow 4k \neq -4 \Rightarrow k \neq -1$$

Hence the given system of linear equations has no solution, when

$$k = 2 \text{ and } k \neq -2 \text{ and } k \neq -1.$$

Ex.56 Determine the value of k for each of the following given system of equations having unique/consistent solution.

(i) $2x + 3y - 5 = 0$; $kx - 6y = 8$

(ii) $2x + ky = 1$; $5x - 7y - 5 = 0$

Sol. (i) The given system of equations may be written as

$$2x + 3y - 5 = 0$$

$$kx - 6y - 8 = 0$$

Here, $a_1 = 2, b_1 = 3, c_1 = 5,$

$$a_2 = k, b_2 = -6, c_2 = -8$$

As the given equations have unique solution, we get,

$$\frac{a_1}{a_2} = \frac{2}{k} \quad \text{and}$$

$$\frac{b_1}{b_2} = \frac{3}{-6} = \frac{-1}{2}$$

Here $\frac{a_1}{a_2} \neq \frac{b_1}{b_2}$

$$\Rightarrow \frac{2}{k} \neq \frac{-1}{2}$$

$$\Rightarrow k \neq -4$$

Thus the given system of equations have a unique solution for all real values of k except -4 .

(ii) The given system of equations may be written as

$$2x + ky - 1 = 0$$

$$5x - 7y - 5 = 0$$

Here, $a_1 = 2, b_1 = k, c_1 = -1,$

$$a_2 = 5, b_2 = -7, c_2 = -5$$

We have $\frac{a_1}{a_2} = \frac{2}{5}$ and $\frac{b_1}{b_2} = \frac{k}{-7} = \frac{-k}{7}$

Here $\frac{a_1}{a_2} \neq \frac{b_1}{b_2} \Rightarrow \frac{2}{5} \neq \frac{-k}{7}$

It satisfies the condition that the system of given solutions has a unique solution.

So, $\frac{2}{5} \neq \frac{-k}{7}$

$$\Rightarrow k \neq \frac{-14}{5}$$

Thus, the given system of equations has a unique solution for all real values of k except $\frac{-14}{5}$.

Ex.57 Determine the value of k for each of the following given system of equations having unique/consistent solution.

(i) $x - ky - 2 = 0$; $3x + 2y + 5 = 0$

(ii) $2x - 3y - 1 = 0$; $kx + 5y - 7 = 0$

Sol. (i) We have,

$$x - ky - 2 = 0$$

$$3x + 2y + 5 = 0$$

Here, $a_1 = 1, b_1 = -k, c_1 = -2,$

$$a_2 = 3, b_2 = 2, c_2 = 5$$

Since, the given system of equations has a unique solution, we have

$$\Rightarrow \frac{a_1}{a_2} \neq \frac{b_1}{b_2}$$

or $\frac{1}{3} \neq \frac{-k}{2}$

$$\Rightarrow k \neq \frac{-2}{3}$$

Thus, the given system of equations has a solution for all values of k except $\frac{-2}{3}$

(ii) We have

$$2x - 3y - 1 = 0$$

$$kx + 5y - 7 = 0$$

Here, $a_1 = 2, b_1 = -3, c_1 = -1,$

$$a_2 = k, b_2 = 5, c_2 = -7$$

Since, the given system of equations has a unique solution, we get

$$\frac{a_1}{a_2} \neq \frac{b_1}{b_2}$$

$$\Rightarrow \frac{2}{k} \neq \frac{-3}{5}$$

$$\Rightarrow k \neq \frac{-10}{3}$$

Thus, the given system of equation has a unique solution for all value of k except $\frac{-10}{3}$.

Ex.58 Find the value of k for each of the following systems of equations having infinitely many solutions.

(i) $2x + 3y = k; (k - 1)x + (k + 2)y = 3k$

(ii) $2x + 3y = 2; (k + 2)x + (2k + 1)y = 2(k - 1)$

Sol.(i) We have

$$2x + 3y - k = 0$$

$$(k - 1)x + (k + 2)y - 3k = 0$$

Here $a_1 = 2, b_1 = 3, c_1 = -k,$

$$a_2 = k - 1, b_2 = k + 2, c_2 = -3k$$

Since, the given system of equations has infinitely many solutions, we get

$$\frac{a_1}{a_2} = \frac{2}{k-1}, \frac{b_1}{b_2} = \frac{3}{k+2}, \frac{c_1}{c_2} = \frac{-k}{-3k}$$

and $\frac{a_1}{a_1} = \frac{b_1}{b_2} = \frac{c_1}{c_2}$

$$\Rightarrow \frac{2}{k-1} = \frac{3}{k+2} = \frac{1}{3}$$

$$\Rightarrow \frac{2}{k-1} = \frac{3}{k+2} \quad \text{or} \quad \frac{3}{k+2} = \frac{1}{3}$$

$$\Rightarrow 2k + 4 = 3k - 3 \quad \text{or} \quad k + 2 = 9$$

$$\Rightarrow 3k - 2k = 4 + 3 \quad \text{or} \quad k = 7$$

$$\Rightarrow k = 7 \quad \text{or} \quad k = 7$$

$$\Rightarrow k = 7$$

It shows that the given system of equations has infinitely many solutions at $k = 7$

(ii) We have

$$2x + 3y - 2 = 0$$

$$(k + 2)x + (2k + 1)y - 2(k - 1) = 0$$

Here, $a_1 = 2, b_1 = 3, c_1 = -2,$

$$a_2 = k + 2, b_2 = 2k + 1, c_2 = -2(k - 1)$$

Since, the given system of equations has infinitely many solutions, we get

$$\frac{a_1}{a_2} = \frac{2}{k+2}, \frac{b_1}{b_2} = \frac{3}{2k+1}, \frac{c_1}{c_2} = \frac{-2}{-2(k-1)}$$

and $\frac{a_1}{a_1} = \frac{b_1}{b_2} = \frac{c_1}{c_2}$

$$\Rightarrow \frac{2}{k+2} = \frac{3}{2k+1} = \frac{1}{k-1}$$

$$\Rightarrow \frac{2}{k+2} = \frac{3}{2k+1} \quad \text{or} \quad \frac{3}{2k+1} = \frac{1}{k-1}$$

$$\Rightarrow 4k + 2 = 3k + 6 \quad \text{or} \quad 3k - 3 = 2k + 1$$

$$\Rightarrow 4k - 3k = 6 - 2 \quad \text{or} \quad 3k - 2k = 1 + 3$$

$$\Rightarrow k = 4$$

$$\text{or} \quad k = 4$$

$$\Rightarrow k = 4$$

Ex.59 Determine the values of k for the following system of equations having no solution.

$$x + 2y = 0; 2x + ky = 5$$

Sol. The given system of equations may be written as

$$x + 2y = 0$$

$$2x + ky - 5 = 0$$

Here, $a_1 = 1, b_1 = 2, c_1 = 0,$

$$a_2 = 2, b_2 = k, c_2 = -5$$

As the given system of equations has no solution, we get

$$\frac{a_1}{a_2} = \frac{1}{2} = \frac{b_1}{b_2} = \frac{2}{k} \neq \frac{c_1}{c_2} = \frac{0}{-5}$$

We must write

$$\frac{a_1}{a_2} = \frac{b_1}{b_2} \neq \frac{c_1}{c_2}$$

$$\Rightarrow \frac{1}{2} = \frac{2}{k}$$

$$\Rightarrow k = 4$$

Here, for this value of k, we get

$$\frac{a_1}{a_2} = \frac{b_1}{b_2} \neq \frac{c_1}{c_2}$$

Ex.60 Find the value of k of the following system of equations having infinitely many solutions.

$$2x - 3y = 7; (k + 2)x - (2k + 1)y = 3(2k - 1)$$

Sol. A given system of equations has infinitely many solutions, if

$$\frac{a_1}{a_1} = \frac{b_1}{b_2} = \frac{c_1}{c_2}$$

So, we get

$$\Rightarrow \frac{2}{k+2} = \frac{-3}{-(2k+1)} = \frac{7}{3(2k-1)}$$

$$\Rightarrow \frac{2}{k+2} = \frac{3}{2k+1} \quad \text{or} \quad \frac{3}{2k+1} = \frac{7}{6k-3}$$

$$\Rightarrow 4k+2 = 3k+6 \quad \text{or} \quad 18k-9 = 14k+7$$

$$\Rightarrow k=4 \quad \text{or} \quad k=4$$

$$\Rightarrow k=4$$

Thus, the given system of equations has infinitely many solutions at $k=4$.

Ex.61 Determine the values of a and b so that the following given system of linear equations has infinitely many solutions.

$$2x - (2a + 5)y = 5; \quad (2b + 1)x - 9y = 15$$

Sol. We have

$$2x - (2a + 5)y - 5 = 0$$

$$(2b + 1)x - 9y - 15 = 0$$

$$\text{Hence, } a_1 = 2, b_1 = -(2a + 5), c_1 = -5,$$

$$a_2 = 2b + 1, b_2 = -9, c_2 = -15 :$$

The given system of equations has infinitely many solutions, if

$$\frac{a_1}{a_2} = \frac{b_1}{b_2} = \frac{c_1}{c_2} \quad \text{such that}$$

$$\frac{2}{2b+1} = \frac{-(2a+5)}{-9} = \frac{-5}{-15}$$

$$\Rightarrow \frac{2}{2b+1} = \frac{2a+5}{9} = \frac{1}{3}$$

$$\Rightarrow \frac{2}{2b+1} = \frac{1}{3} \quad \text{and} \quad \frac{2a+5}{9} = \frac{1}{3}$$

$$\Rightarrow 2b + 1 = 6 \quad \text{or} \quad 6a + 15 = 9$$

$$\Rightarrow b = \frac{5}{2} \quad \text{and} \quad a = -1$$

Thus, the given system of equations has infinitely many solutions at $a = -1, b = \frac{5}{2}$.

Ex.62 Find the value of c if the following system of equation has no solution.

$$cx + 3y = 3; \quad 12x + cy = 5$$

Sol. We have

$$cx + 3y - 3 = 0$$

$$12x + cy - 5 = 0$$

The given system of equations has no solution, if

$$\frac{a_1}{a_2} = \frac{b_1}{b_2} \neq \frac{c_1}{c_2} \quad \text{such that} \quad \frac{c}{12} = \frac{3}{c} \neq \frac{-3}{-6}$$

$$\Rightarrow \frac{c}{12} = \frac{3}{c} \quad \text{and} \quad \frac{3}{c} \neq \frac{1}{2}$$

$$\Rightarrow c^2 = 36$$

$$\Rightarrow c = \pm 6$$

Thus, the given system of equation has no solution at $c = \pm 6$.

Ex.63 For what value of p , the system of equations will have no solution ?

$$px - (p-3) = -3y; \quad py = p - 12x$$

Sol. The given system of equations may be written as

$$px + 3y - (p-3) = 0$$

$$12x + py - p = 0$$

$$\text{Here, } a_1 = p, b_1 = 3, c_1 = -(p-3),$$

$$a_2 = 12, b_2 = p, c_2 = -p$$

The given system of equations will have no

solution, if $\frac{a_1}{a_2} = \frac{b_1}{b_2} \neq \frac{c_1}{c_2}$

$$\text{For it we get, } \frac{p}{12} = \frac{3}{p} \quad \text{and} \quad \frac{3}{p} \neq \frac{p-3}{p}$$

$$\Rightarrow p^2 = 36 \Rightarrow p = \pm 6$$

$$\text{When } p = 6, \quad \frac{3}{p} = \frac{3}{6} = \frac{1}{2} \quad \text{and} \quad \frac{p-3}{p} = \frac{6-3}{6} = \frac{1}{2}$$

So, $\frac{3}{p} = \frac{p-3}{p} = \frac{1}{2}$. Thus, $p = 6$ does not

satisfy the equation $\frac{3}{p} \neq \frac{p-3}{p}$

$$\text{When } p = -6, \quad \frac{3}{p} = \frac{3}{-6} = \frac{-1}{2}$$

$$\text{and} \quad \frac{p-3}{p} = \frac{-6-3}{-6} = \frac{-9}{-6} = \frac{3}{2}$$

$$\text{So, } \frac{3}{p} \neq \frac{p-3}{p}$$

Thus, $p = -6$ satisfy the equation $\frac{3}{p} \neq \frac{p-3}{p}$.

Thus, the given system of equations will have no solution, if $p = -6$

Ex.64 Find the value of k for the following system of equations has no solution.

$$(3k+1)x + 3y = 2; \quad (k^2+1)x - 5 = -(k-2)y$$

Sol. The given system of equations may be written as

$$(3k + 1)x + 3y - 2 = 0$$

$$(k^2 + 1)x + (k - 2)y - 5 = 0$$

Here, $a_1 = 3k + 1$, $b_1 = 3$, $c_1 = -2$,

$$a_2 = k^2 + 1, b_2 = k - 2, c_2 = -5$$

Since the given system of equations has no solution therefore, we can write ;

$$\frac{a_1}{a_2} = \frac{b_1}{b_2} \neq \frac{c_1}{c_2}$$

$$\Rightarrow \frac{3k+1}{k^2+1} = \frac{3}{k-2} \neq \frac{-2}{-5}$$

$$\Rightarrow \frac{3k+1}{k^2+1} = \frac{3}{k-2} \text{ and } \frac{3}{k-2} \neq \frac{2}{5}$$

So, $\frac{3k+1}{k^2+1} = \frac{3}{k-2}$

$$\Rightarrow 3k^2 - 6k + k - 2 = 3k^2 + 3$$

$$\Rightarrow -5k = 5 \Rightarrow k = -1$$

Putting $k = -1$ in the equation $\frac{3}{k-2} \neq \frac{2}{5}$,

we get

$$\frac{3}{-1-2} = -1 \neq \frac{2}{5}$$

Thus, $k = -1$ satisfy $\frac{3}{k-2} \neq \frac{2}{5}$

Thus, the given system of equation has no solution at $k = -1$

Ex.65 Determine the values of a and b so that the following system of equations has infinite number of solutions.

$$3x + 4y - 12 = 0$$

$$2(a - b)y - (5a - 1) = -(a + b)x$$

Sol. The given system of equations may be written as

$$3x + 4y - 12 = 0$$

$$(a + b)x + 2(a - b)y - (5a - 1) = 0$$

Here, $a_1 = 3$, $b_1 = 4$, $c_1 = -12$,

$$a_2 = a + b, b_2 = 2(a - b), c_2 = -(5a - 1)$$

Since, the given system of equations has infinite number of solutions therefore, we get

$$\frac{a_1}{a_2} = \frac{b_1}{b_2} = \frac{c_1}{c_2}$$

$$\Rightarrow \frac{3}{a+b} = \frac{4}{2(a-b)} = \frac{-12}{-(5a-1)}$$

$$\Rightarrow \frac{3}{a+b} = \frac{4}{2(a-b)} \text{ and } \frac{4}{2(a-b)} = \frac{12}{5a-1}$$

$$\Rightarrow 6a - 6b = 4a + 4b \text{ and } 20a - 4 = 24a - 24b$$

$$\Rightarrow 6a - 4a - 6b - 4b = 0 \text{ and}$$

$$20a - 24a + 24b = 4$$

$$\Rightarrow 2a - 10b = 0 \text{ and } 24b - 4a = 4$$

$$\Rightarrow a - 5b = 0 \text{ and } 6b - a = 1$$

Adding the above two equations, we get

$$-5b + 6b = 1$$

$$\Rightarrow b = 1$$

Putting $b = 1$ in the equation $6b - a = 1$, we get

$$6 \times 1 - a = 1 \Rightarrow 6 - a = 1 \Rightarrow a = 5$$

Thus, the given system of equations has infinitely many solutions at $a = 5$, $b = 1$.

HOMOGENEOUS EQUATIONS

The system of equations

$$a_1x + b_1y = 0$$

$$a_2x + b_2y = 0$$

called homogeneous equations has only

solution $x = 0$, $y = 0$, when $\frac{a_1}{a_2} \neq \frac{b_1}{b_2}$

(i) when $\frac{a_1}{a_2} \neq \frac{b_1}{b_2}$,

The system of equations has only one solution, and the system is consistent.

(ii) When $\frac{a_1}{a_2} = \frac{b_1}{b_2}$

The system of equations has infinitely many solutions and the system is consistent.

Ex.66 Find the value of k for which the system of equations

$$4x + 5y = 0; kx + 10y = 0$$

has infinitely many solutions.

Sol. The given system is of the form

$$a_1x + b_1y = 0$$

$$a_2x + b_2y = 0$$

$$a_1 = 4, b_1 = 5 \text{ and } a_2 = k, b_2 = 10$$

If $\frac{a_1}{a_2} = \frac{b_1}{b_2}$, the system has infinitely many solutions.

$$\Rightarrow \frac{4}{k} = \frac{5}{10}$$

$$\Rightarrow k = 8$$



WORD PROBLEMS ON SIMULTANEOUS LINEAR EQUATION

Problems Based on Articles

❖ EXAMPLES ❖

Ex.67 The coach of a cricket team buys 7 bats and 6 balls for ₹ 3800. Later, he buys 3 bats and 5 balls for ₹ 1750. Find the cost of each bat and each ball.

Sol. Let the cost of one bat be ₹ x and cost of one ball be ₹ y . Then

$$7x + 6y = 3800 \quad \dots(1)$$

$$3x + 5y = 1750 \quad \dots(2)$$

From (1) $y = \frac{3800 - 7x}{6}$

Putting $y = \frac{3800 - 7x}{6}$ in (2), we get

$$3x + 5\left(\frac{3800 - 7x}{6}\right) = 1750 \quad \dots(3)$$

Multiplying (3) by 6, we get

$$18x + 5(3800 - 7x) = 10500$$

$$\Rightarrow 18x + 19000 - 35x = 10500$$

$$\Rightarrow -17x = 10500 - 19000$$

$$\Rightarrow -17x = -8500 \quad \Rightarrow x = 500$$

Putting $x = 500$ in (1), we get

$$7(500) + 6y = 3800$$

$$\Rightarrow 3500 + 6y = 3800$$

$$\Rightarrow 6y = 3800 - 3500$$

$$\Rightarrow 6y = 300 \quad \Rightarrow y = 50$$

Hence, the cost of one bat = ₹ 500

and the cost of one ball = ₹ 50

Ex.68 Meena went to a bank to withdraw ₹ 2000. She asked the cashier to give ₹ 50 and ₹ 100 notes only. Meena got 25 notes in all. Find how many notes of ₹ 50 and ₹ 100 she received ?

Sol. Let the number of notes of ₹ 50 be x , and the number of notes of ₹ 100 be y . Then according to the question,

$$x + y = 25 \quad \dots(1)$$

$$50x + 100y = 2000 \quad \dots(2)$$

Multiplying (1) by 50, we get

$$50x + 50y = 1250 \quad \dots(3)$$

Subtracting (3) from (2), we have

$$50y = 750 \quad \Rightarrow y = 15$$

Putting $y = 15$ in (1), we get

$$x + 15 = 25 \quad \Rightarrow x = 25 - 15 = 10$$

Hence, the number of notes of ₹ 50 was 10 and that of ₹ 100 was 15.

Ex.69 Yash scored 40 marks in a test, receiving 3 marks for each right answer and losing 1 mark for each wrong answer. Had 4 marks been awarded for each correct answer and 2 marks been deducted for each incorrect answer, then Yash would have scored 50 marks. How many questions were there in the test ?

Sol. Let the number of correct answers of Yash be x and number of wrong answers be y . Then according to question :

Case I. He gets 40 marks if 3 marks are given for correct answer and 1 mark is deducted for incorrect answers.

$$3x - y = 40 \quad \dots(1)$$

Case II. He gets 50 marks if 4 marks are given for correct answer and 2 marks are deducted for incorrect answers.

$$4x - 2y = 50 \quad \dots(2)$$

Multiplying (1) by 2, we get

$$6x - 2y = 80 \quad \dots(3)$$

Subtracting (2) from (3), we get

$$2x = 30 \quad \Rightarrow x = \frac{30}{2} = 15$$

Putting $x = 15$ in (1); we get

$$3 \times 15 - y = 40$$

$$\Rightarrow 45 - y = 40 \quad \Rightarrow y = 5$$

Total number of questions = number of correct answers + number of incorrect answers.

$$= 15 + 5 = 20$$

Problems Based on Numbers

Ex.70 What number must be added to each of the numbers, 5, 9, 17, 27 to make the numbers in proportion ?

Sol. Four numbers are in proportion if
First \times Fourth = Second \times Third.

Let x be added to each of the given numbers to make the numbers in proportion. Then,

$$(5 + x)(27 + x) = (9 + x)(17 + x)$$

$$\Rightarrow 135 + 32x + x^2 = 153 + 26x + x^2$$

$$\Rightarrow 32x - 26x = 153 - 135$$

$$\Rightarrow 6x = 18 \quad \Rightarrow x = 3$$

Ex.72 The difference between two numbers is 26 and one number is three times the other. Find them.

Sol. Let the numbers be x and y .

Difference of two numbers is 26.

$$\text{i.e.,} \quad x - y = 26 \quad \dots(1)$$

One number is three times the other.

$$\text{i.e.,} \quad x = 3y \quad \dots(2)$$

Putting $x = 3y$ in (1), we get

$$3y - y = 26$$

$$\Rightarrow 2y = 26 \quad \Rightarrow y = 13$$

Putting $y = 13$ in (2), we get

$$x = 3 \times 13 = 39$$

Hence, the numbers are $x = 39$ and $y = 13$.

Problems Based on Ages

Ex.73 Father's age is three times the sum of ages of his two children. After 5 years his age will be twice the sum of ages of two children. Find the age of father.

Sol. Let the age of father = x years.

And the sum of the ages of his two children = y years

According to the question

Father's age = $3 \times$ (sum of the ages of his two children)

$$\Rightarrow x = 3y \quad \dots(1)$$

After 5 years

Father's age = $(x + 5)$ years

sum of the ages of his two childrens

$$= y + 5 + 5 = y + 10$$

[Age of his each children increases by 5 years]

According to the question,

After 5 years

Father's age = $2 \times$ (sum of ages of his two children)

$$\Rightarrow x + 5 = 2 \times (y + 10)$$

$$\Rightarrow x + 5 = 2y + 20$$

$$\Rightarrow x - 2y = 15 \quad \dots(2)$$

Putting $x = 3y$ from (1) in (2), we get

$$3y - 2y = 15$$

$$\Rightarrow y = 15 \text{ years}$$

$$\text{And } x = 3y \Rightarrow x = 3 \times 15 = 45$$

$$\Rightarrow x = 45 \text{ years.}$$

Hence, father's age = 45 years

Ex.74 Five years hence, the age of Jacob will be three times that of his son. Five years ago, Jacob's age was seven times that of his son. What are their present ages.

Sol. Let the present age of Jacob and his son be x and y respectively.

Case I. After five years age of Jacob = $(x + 5)$,

After five years the age of his son = $(y + 5)$.

According to question

$$x + 5 = 3(y + 5)$$

$$\Rightarrow x - 3y = 10 \quad \dots(1)$$

Case II. Five years ago Jacob's age = $x - 5$, and his son's age = $y - 5$. Then, according to question,

$$x - 5 = 7(y - 5)$$

$$\Rightarrow x = 7y - 30 \quad \dots(2)$$

Putting $x = 7y - 30$ from (2) in (1), we get

$$7y - 30 - 3y = 10$$

$$\Rightarrow 4y = 40 \Rightarrow y = 10$$

Putting $y = 10$ in (1), we get

$$x - 3 \times 10 = 10$$

$$\Rightarrow x = 10 + 30 \quad \Rightarrow x = 40$$

Hence, age of Jacob is 40 years, and age of his son is 10 years.

Problems Based on two digit numbers

Ex.75 The sum of a two digit number and the number obtained by reversing the order of its digits is 99. If the digits differ by 3, find the number.

Sol. Let the unit's place digit be x and the ten's place digit be y .

$$\therefore \text{Original number} = x + 10y$$

The number obtained by reversing the digits = $10x + y$

According to the question,

Original number + Reversed number = 99

$$\Rightarrow (x + 10y) + (10x + y) = 99$$

$$\Rightarrow 11x + 11y = 99$$

$$\Rightarrow x + y = 9$$

$$\Rightarrow x = 9 - y \quad \dots(1)$$

Given the difference of the digit = 3

$$\Rightarrow x - y = 3 \quad \dots(2)$$

On putting the value of $x = 9 - y$ from equation (1) in equation (2), we get

$$(9 - y) - y = 3 \Rightarrow 9 - 2y = 3$$

$$\Rightarrow 2y = 6 \quad \Rightarrow y = 3$$

Substituting the the value of $y = 3$ in equation (1), we get

$$x = 9 - y = 9 - 3 = 6$$

Hence, the number is $x + 10y = 6 + 10 \times 3 = 36$.

Ex.76 The sum of a two-digit number and the number obtained y reversing the order of its digits is 165. If the digits differ by 3, find the number.

Sol. Let unit's place digit = x

And ten's place digit = y

$$\therefore \text{Original number} = x + 10y$$

The number obtained by reversing the digits = $10x + y$

According to first condition.

The original number + Reversed number = 165

$$\Rightarrow x + 10y + 10x + y = 165$$

$$\Rightarrow 11x + 11y = 165$$

$$\Rightarrow x + y = \frac{165}{11} = 15$$

$$\Rightarrow x = 15 - y \quad \dots(1)$$

According to second condition.

The difference of the digits = 3

$$\Rightarrow x - y = 3 \quad \dots(2)$$

Substituting $x = 15 - y$ from equation (1) in equation (2), we get

$$(15 - y) - y = 3$$

$$\Rightarrow 15 - 2y = 3$$

$$\Rightarrow 2y = 12 \quad \Rightarrow y = 6$$

Putting $y = 6$ in equation (1), we have

$$x = 15 - 6 \Rightarrow x = 9$$

Hence, the original number = $x + 10y$

$$= 9 + 10 \times 6 = 69$$

Ex.77 The sum of the digits of a two-digit number is 9. Also, nine times this number is twice the number obtained by reversing the order of the number. Find the number.

Sol. Let the ten's and the unit's digits in the number be x and y , respectively. So, the number may be written as $10x + y$.

When the digits are reversed, x becomes the unit's digit and y becomes the ten's digit.

The number can be written as $10y + x$.

According to the given condition,

$$x + y = 9 \quad \dots(1)$$

We are also given that nine times the number i.e., $9(10x + y)$ is twice the numbers obtained by reversing the order of the number i.e. $2(10y + x)$.

$$\therefore 9(10x + y) = 2(10y + x)$$

$$\Rightarrow 90x + 9y = 20y + 2x$$

$$\Rightarrow 90x - 2x + 9y - 20y = 0$$

$$\Rightarrow 88x - 11y = 0$$

$$\Rightarrow 8x - y = 0 \quad \dots(2)$$

Adding (1) and (2), we get

$$9x = 9$$

$$\Rightarrow x = 1$$

Putting $x = 1$ in (1), we get

$$y = 9 - 1 = 8$$

Thus, the number is

$$10 \times 1 + 8 = 10 + 8 = 18$$

Problems Based on Fraction

Ex.78 The sum of the numerator and denominator of a fraction is 4 more than twice the numerator. If the numerator and denominator are increased by 3, they are in the ratio 2 : 3. Determine the fraction.

Sol. Let Numerator = x and Denominator = y

$$\therefore \text{Fraction} = \frac{x}{y}$$

According to the first condition,

Numerator + denominator = $2 \times$ numerator + 4

$$\Rightarrow x + y = 2x + 4$$

$$\Rightarrow y = x + 4 \quad \dots(1)$$

According to the second condition,

$$\frac{\text{Increased numerator by 3}}{\text{Increased denominator by 3}} = \frac{2}{3}$$

$$\Rightarrow \frac{x+3}{y+3} = \frac{2}{3}$$

$$\Rightarrow 3x + 9 = 2y + 6$$

$$\Rightarrow 3x - 2y + 3 = 0 \quad \dots(2)$$

Substituting the value of y from equation (1) into equation (2), we get

$$3x - 2(x + 4) + 3 = 0$$

$$\Rightarrow 3x - 2x - 8 + 3 = 0$$

$$\Rightarrow x = 5$$

On putting $x = 5$ in equation (1), we get

$$y = 5 + 4$$

$$\Rightarrow y = 9$$

Hence, the fraction $= \frac{x}{y} = \frac{5}{9}$

Ex.79 The sum of the numerator and denominator of a fraction is 3 less than twice the denominator. If the numerator and denominator are decreased by 1, the numerator becomes half the denominator. Determine the fraction.

Sol. Let Numerator = x and Denominator = y ,

Then, fraction $= \frac{x}{y}$

According to the first condition,

Numerator + denominator = twice of the denominator - 3

$$\Rightarrow x + y = 2y - 3$$

$$\Rightarrow 2y - y = 3 + x$$

$$\Rightarrow y = 3 + x \quad \dots(1)$$

According to the second condition,

Decreased numerator by 1 = $\frac{1}{2}$ (decreased denominator)

$$(x - 1) = \frac{1}{2} (y - 1)$$

$$\Rightarrow 2(x - 1) = y - 1$$

$$\Rightarrow 2x - y = -1 + 2$$

$$\Rightarrow 2x - y = 1 \quad \dots(2)$$

Substituting $y = 3 + x$ in equation (2), we have

$$2x - (3 + x) = 1$$

$$\Rightarrow 2x - x = 1 + 3$$

$$\Rightarrow x = 4$$

On putting $x = 4$ in equation (1), we get

$$y = 3 + 4$$

$$\Rightarrow y = 7$$

Hence, the fraction $= \frac{x}{y} = \frac{4}{7}$

Ex.80 A fraction becomes $\frac{9}{11}$, if 2 is added to both the numerator and the denominator. If 3 is

added to both the numerator and the denominator it becomes $\frac{5}{6}$. Find the fraction.

Sol. Let the numerator be x and denominator be y . Then, according to the question,

Case 1 : $\frac{x+2}{y+2} = \frac{9}{11}$

$$\Rightarrow 11(x+2) = 9(y+2)$$

$$\Rightarrow 11x + 22 = 9y + 18$$

$$\Rightarrow 11x - 9y = -4 \quad \dots(1)$$

Case 2 : $\frac{x+3}{y+3} = \frac{5}{6}$

$$\Rightarrow 6(x+3) = 5(y+3)$$

$$\Rightarrow 6x + 18 = 5y + 15$$

$$\Rightarrow 6x - 5y = -3 \quad \dots(2)$$

$$\Rightarrow x = \frac{5y-3}{6}$$

Putting $x = \frac{5y-3}{6}$ in (1), we get

$$11\left(\frac{5y-3}{6}\right) - 9y = -4 \quad \dots(3)$$

Multiplying (3) by 6, we get

$$11(5y-3) - 54y = -24$$

$$55y - 33 - 54y = -24$$

$$y = 33 - 24 = 9$$

Putting $y = 9$ in (1), we get

$$11x - 9 \times 9 = -4$$

$$11x = -4 + 81 = 77 \Rightarrow x = 7$$

Hence, the required fraction is $\frac{7}{9}$.

Ex.81 A fraction becomes $\frac{4}{5}$ if 1 is added to each of the numerator and denominator. However, if we subtract 5 from each, the fraction becomes $\frac{1}{2}$. Find the fraction.

Sol. Let the required fraction be $\frac{x}{y}$ where x be the numerator and y be the denominator.

First Case :

According to the question,

$$\frac{x+1}{y+1} = \frac{4}{5}$$

$$\Rightarrow 5x + 5 = 4y + 4$$

$$\Rightarrow 5x - 4y = -1$$

Second Case : 5 is subtracted from x and y

$$\text{So, } \frac{x-5}{y-5} = \frac{1}{2}$$

$$\Rightarrow 2x - 10 = y - 5$$

$$\Rightarrow 2x - y = 5 \quad \dots(2)$$

Multiplying equation (2) by 4 and equation (1) by 1, we get

$$5x - 4y = -1 \quad \dots(3)$$

$$8x - 4y = 20 \quad \dots(4)$$

Subtracting (4) from (3), we get

$$-3x = -21$$

$$\Rightarrow x = 7$$

Substituting the value of x in (2) we get

$$2 \times 7 - y = 5$$

$$\Rightarrow y = 9$$

$$\text{So, } \frac{x}{y} = \frac{7}{9}$$

Hence, the required fraction is $\frac{7}{9}$.

Problem on Fixed Charges & Running Charges

Ex.82 A Taxi charges consist of fixed charges and the remaining depending upon the distance travelled in kilometers. If a persons travels 10 km, he pays ₹ 68 and for travelling 15 km, he pays ₹ 98. Express the above statements with the help of simultaneous equations and hence, find the fixed charges and the rate per km.

Sol. Let fixed charges of taxi = ₹ x.

And running charges of taxi = ₹ y per km.

According to the question,

Expenses of travelling 10 km = ₹ 68.

$$\therefore x + 10y = 68 \quad \dots(1)$$

Again expenses of travelling 15 km = ₹ 98.

$$\therefore x + 15y = 98 \quad \dots(2)$$

Subtracting equation (1) from equation (2), we get

$$5y = 30 \quad \Rightarrow y = 6$$

On putting y = 6 in equation (1), we have

$$x + 10 \times 6 = 68$$

$$\Rightarrow x = 68 - 60$$

$$\Rightarrow x = 8$$

Hence, fixed charges of taxi = x = ₹ 8 and running charges per km = y = ₹ 6.

Ex.83 A lending library has a fixed charge for the first three days and an addition charge for each day thereafter. Sarika paid ₹ 27 for a book kept for seven days. While Susy paid ₹ 21 for the book the kept for five days. Find the fixed charge and the charge for each extra day.

Sol. Let fixed charge be ₹ x.

and the charge for each extra day be ₹ y.

According to the question

Case I. Sarika paid ₹ 27 for 7 days i.e. 4 extra days.

$$\therefore x + 4y = 27 \quad \dots(1)$$

Susy paid ₹ 21 for 5 days i.e. 2 extra days

$$\therefore x + 2y = 21 \quad \dots(2)$$

Subtracting (2) from (1), we get

$$2y = 6$$

$$\Rightarrow y = 3$$

Putting y = 3 in (1), we get

$$x + 4 \times 3 = 27$$

$$\Rightarrow x = 27 - 12 = 15$$

Hence, the fixed charge is ₹ 15 and the charge for each extra days is ₹ 3.

Ex.84 The taxi charges in a city consist of a fixed charge together with the charge for the distance covered. For a distance of 10 km, the charge paid is ₹ 105 and for a journey of 15 km, the charge paid is 155. What are the fixed charges and the charges per kilometer ? How much does a person have to pay for travelling a distance of 25 km ?

Sol. Let fixed charges of taxi = ₹ x

And running charges of taxi = ₹ y per km.

According to the question,

Express of travelling 10 km = ₹ 105

$$\therefore x + 10y = 105 \quad \dots(1)$$

Again expenses of travelling 15 km = ₹ 155

$$\therefore x + 15y = 155 \quad \dots(2)$$

$$\Rightarrow x = 155 - 15y$$

Putting x = 155 - 15y in (1), we get

$$155 - 15y + 10y = 105$$

$$\Rightarrow 155 - 5y = 105$$

$$\Rightarrow -5y = 105 - 155$$

$$\Rightarrow -5y = -50 \quad \Rightarrow y = 10$$

Putting $y = 10$ in (2), we get

$$x + 15 \times 10 = 155$$

$$\Rightarrow x + 150 = 155$$

$$\Rightarrow x = 155 - 150 = 5$$

Hence, fixed charges of taxi = $x = ₹ 5$ and running charges per km = $y = ₹ 10$. A person should pay for travelling 25 km = $5 + 25 \times 10 = 5 + 250 = ₹ 255$

Problems Based on Speed & Time

Ex.85 Places A and B are 100 km apart on the highway. One car starts from A and another from B at the same time. If the cars travel in the same direction at a different speed, they meet in 5 hours. If they travel towards each other, they meet in 1 hour. What are the speed of the two cars ?

Sol. Let the speed of the first car, starting from A = x km/hr.

And the speed of second car, starting from B = y km/hr.

Distance travelled by first car in 5 hours = $AC = 5x$

Distance travelled by second car in 5 hours = $BC = 5y$

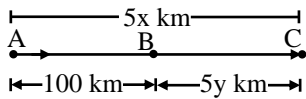
According to the question,

Let them meet at C, when moving in the same direction.

$$AC = AB + BC$$

$$5x = 100 + 5y$$

$$\Rightarrow x = 20 + y \quad \dots(1)$$

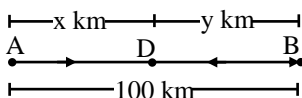


$$\text{Distance} = \text{Speed} \times \text{Time}$$

When moving in the opposite direction, let them meet at D

Distance travelled by first car in 1 hour = $AD = x$.

Distance travelled by second car in 1 hour = $BD = y$



$$AD + BD = AB$$

$$\Rightarrow x + y = 100 \quad \dots(2)$$

Substituting $x = 20 + y$ from equation (1) in equation (2), we have

$$(20 + y) + y = 100$$

$$\Rightarrow 20 + 2y = 100$$

$$\Rightarrow 2y = 100 - 20 = 80$$

$$\Rightarrow y = 40 \text{ km/hour}$$

On putting $y = 40$ in equation (1), we get

$$x = 20 + 40 = 60 \text{ km/hour}$$

Hence, the speed of first car = 60 km/hour

and the speed of the second car = 40 km/hour.

Ex.91 A person rows downstream 20 km in 2 hours and upstream 4 km in 2 hours. Find man's speed of rowing in still water and the speed of the current.

Sol. Let man's speed of rowing in still water and the speed of the current be x km/hr and y km/hr respectively.

Then, the upstream speed = $(x - y)$ km/hr

and the downstream speed = $(x + y)$ km/hr

we know that

$$\text{time} = \frac{\text{distance}}{\text{speed}}$$

First case :

$$\Rightarrow 2 = \frac{20}{x + y}$$

$$\Rightarrow 2(x + y) = 20$$

$$\Rightarrow x + y = 10 \quad \dots(1)$$

2nd Case :

$$2 = \frac{4}{x - y} \Rightarrow 2(x - y) = 4$$

$$\Rightarrow x - y = 2 \quad \dots(2)$$

Adding (1) and (2), we get

$$\Rightarrow 2x = 12$$

$$\Rightarrow x = 6$$

Substituting the value of x in equation (1), we get

$$6 + y = 10 \Rightarrow y = 4$$

Hence, man's speed of rowing in still water and the speed of the current are 6 km/hr and 4 km/hr respectively.

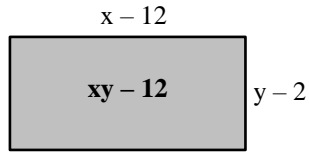
Problems Based on Area

Ex.92 If in a rectangle, the length is increased and breadth reduced each by 2 metres, the area is reduced by 28 sq. metres. If the length is

reduced by 1 metre and breadth increased by 2 metres, the area increases by 33 sq. metres. Find the length and breadth of the rectangle.

Sol. Let length of the rectangle = x metres
 And breadth of the rectangle = y metres
 Area = length \times breadth = xy sq. metres

Case 1: As per the question

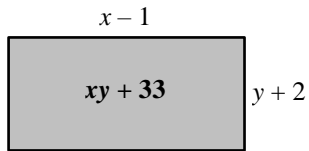


Increased length = $x + 2$
 Reduced breadth = $y - 2$
 Reduced area = $(x + 2)(y - 2)$
 Reduction in area = 28

Original Area – Reduced area = 28

$$\begin{aligned} xy - [(x + 2)(y - 2)] &= 28 \\ \Rightarrow xy - [xy - 2x + 2y - 4] &= 28 \\ \Rightarrow xy - xy + 2x - 2y + 4 &= 28 \\ \Rightarrow 2x - 2y &= 28 - 4 = 24 \\ \Rightarrow x - y &= 12 \end{aligned} \quad \dots(1)$$

Case 2 :



Reduced length = $x - 1$
 \Rightarrow Increased breadth = $y + 2$
 \Rightarrow Increased area = $(x - 1)(y + 2)$
 Increase in area = 33
 \therefore Increased area – original area = 33
 $\Rightarrow (x - 1)(y + 2) - xy = 33$
 $\Rightarrow xy + 2x - y - 2 - xy = 33$
 $\Rightarrow 2x - y = 33 + 2 = 35$
 $\Rightarrow 2x - y = 35 \quad \dots(2)$

Subtracting equation (1) from equation (2), we get

$$x = 23$$

Substituting the value of x in equation (1), we get

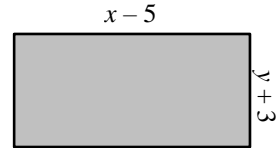
$$\begin{aligned} 2x - y &= 12 \\ \Rightarrow y &= 23 - 12 = 11 \\ \Rightarrow \text{Length} &= 23 \text{ metres.} \end{aligned}$$

\Rightarrow Breadth = 11 metres.

Ex.93 The area of a rectangle gets reduced by 9 square units if its length is reduced by 5 units and breadth is increased by 3 units. If we increase the length by 3 units and the breadth by 2 units, the area increases by 67 square units. Find the dimensions of the rectangle.

Sol. Let the length of rectangle be x units and the breadth of the rectangle be y units
 Area of the rectangle = xy

Case 1 : According to the first condition,

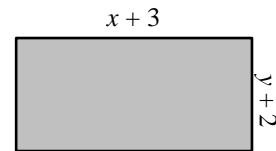


Reduced length = $x - 5$
 Increased breadth = $y + 3$
 Reduced area = $(x - 5)(y + 3)$
 Reduction in area = 9

Original area – Reduced area = 9

$$\begin{aligned} xy - [(x - 5)(y + 3)] &= 9 \\ \Rightarrow xy - [xy + 3x - 5y - 15] &= 9 \\ \Rightarrow xy - xy - 3x + 5y + 15 &= 9 \\ \Rightarrow 3x - 5y &= 6 \end{aligned} \quad \dots(1)$$

Case 2. According to the second condition,



Increased length = $x + 3$
 Increased breadth = $y + 2$
 Increased area = $(x + 3)(y + 2)$
 Increase in area = 67

Increased area – Original area = 67

$$\begin{aligned} \Rightarrow (x + 3)(y + 2) - xy &= 67 \\ \Rightarrow xy + 2x + 3y + 6 - xy &= 67 \\ 2x + 3y &= 61 \end{aligned} \quad \dots(2)$$

On solving (1) and (2), we get
 $x = 17$ units and $y = 9$ units
 Hence, length of rectangle = 17 units,
 and breadth of rectangle = 9 units.

Problems Based on Geometry

Ex.94 The larger of two supplementary angles exceeds the smaller by 18 degrees. Find them.

Sol. Let the angles be x and y . Then according to the question.

$$x + y = 180 \quad \dots(1)$$

$$\text{and } x = y + 18 \quad \dots(2)$$

Putting $x = y + 18$ from (2) in (1), we get

$$y + 18 + y = 180$$

$$2y = 180 - 18$$

$$\Rightarrow 2y = 162$$

$$\Rightarrow y = 81$$

Putting $y = 81$ in (2), we get

$$x = 81 + 18 = 99$$

Hence, angles are $x = 99^\circ$ and $y = 81^\circ$.

Ex.95 In a $\triangle ABC$, $\angle C = 3\angle B = 2(\angle A + \angle B)$. Find the three angles.

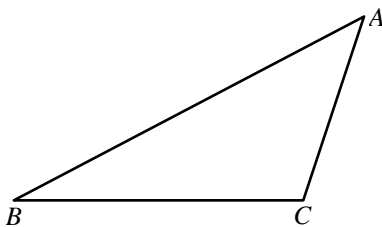
Sol. $\angle C = 2(\angle A + \angle B) \quad \dots(1)$ (given)

Adding $2\angle C$ on both sides of (1), we get

$$\angle C + 2\angle C = 2(\angle A + \angle B) + 2\angle C$$

$$\Rightarrow 3\angle C = 2(\angle A + \angle B + \angle C)$$

$$\Rightarrow \angle C = \frac{2}{3} \times 180^\circ = 120^\circ$$



Again $\angle C = 3\angle B$ (given)

$$120^\circ = 3\angle B$$

$$\Rightarrow \angle B = \frac{120^\circ}{3} = 40^\circ$$

But $\angle A + \angle B + \angle C = 180^\circ$

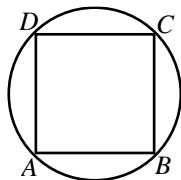
$$\angle A + 40^\circ + 120^\circ = 180^\circ$$

$$\Rightarrow \angle A = 180^\circ - 40^\circ - 120^\circ = 20^\circ$$

$$\angle A = 20^\circ, \angle B = 40^\circ, \angle C = 120^\circ$$

Ex.96 Find a cyclic quadrilateral ABCD, $\angle A = (2x + 4)^\circ$, $\angle B = (y + 3)^\circ$, $\angle C = (2y + 10)^\circ$ and $\angle D = (4x - 5)^\circ$. Find the four angles.

Sol. $\angle A = (2x + 4)^\circ$, and $\angle C = (2y + 10)^\circ$;



But $\angle A + \angle C = 180^\circ$ (Cyclic quadrilateral)

$$\Rightarrow (2x + 4)^\circ + (2y + 10)^\circ = 180^\circ$$

$$\Rightarrow 2x + 2y = 166^\circ$$

$$\text{Also } \Rightarrow \angle B = (y + 3)^\circ, \angle D = (4x - 5)^\circ$$

But $\angle B + \angle D = 180^\circ$ (Cyclic quadrilateral)

$$\Rightarrow (y + 3)^\circ + (4x - 5)^\circ = 180^\circ$$

$$\Rightarrow 4x + y = 182^\circ$$

On solving (1) and (2), we get $x = 33^\circ$, $y = 50^\circ$

$$\angle A = (2x + 4)^\circ = (66 + 4)^\circ = 70^\circ$$

$$\angle B = (y + 3)^\circ = (50 + 3)^\circ = 53^\circ$$

$$\angle C = (2y + 10)^\circ = (100 + 10)^\circ = 110^\circ,$$

$$\angle D = (4x - 5)^\circ = (4 \times 33 - 5)^\circ = 127^\circ$$

$$\angle A = 70^\circ, \angle B = 53^\circ, \angle C = 110^\circ, \angle D = 127^\circ$$

Ex.97 The area of a rectangle remains the same if the length is decreased by 7 dm and breadth is increased by 5 dm. The area remains unchanged if its length is increased by 7 dm and breadth decreased by 3 dm. Find the dimensions of the rectangle.

Sol. Let the length and breadth of a rectangle be x and y units respectively. So, area = (xy) sq. units.

First Case : Length is decreased by 7 dm and breadth is increased by 5 dm.

According to the question,

$$xy = (x - 7)(y + 5)$$

$$\Rightarrow xy = xy + 5x - 7y - 35$$

$$\Rightarrow 5x - 7y - 35 = 0 \quad \dots(1)$$

Second Case : Length is increased by 7 dm and breadth is decreased by 3 dm.

Here, area also remains same

so, we get

$$xy = (x + 7)(y - 3) = xy - 3x + 7y - 21$$

$$\Rightarrow 3x - 7y + 21 = 0 \quad \dots(2)$$

So, the system of equations becomes

$$\Rightarrow 5x - 7y - 35 = 0 \quad \dots(3)$$

$$3x - 7y + 21 = 0 \quad \dots(4)$$

Subtracting equation (4) from (3), we get

$$2x - 56 = 0$$

$$\Rightarrow 2x = 56$$

$$\Rightarrow x = 28 \text{ dm}$$

Substituting $x = 28$ in equation (3), we get

$$5 \times 28 - 7y = 35$$

$$\Rightarrow 7y = 105$$

$$\Rightarrow y = 15 \text{ dm}$$

Hence, length and breadth of the rectangle are 28 dm and 15 dm respectively.

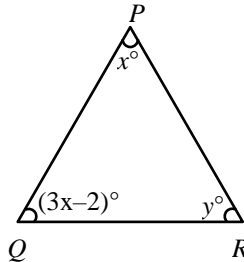
Ex.98 In a triangle PQR, $\angle P = x^\circ$, $\angle Q = (3x - 2)^\circ$, $\angle R = y^\circ$, $\angle R - \angle Q = 9^\circ$. Determine the three angles.

Sol. It is given that

$$\angle P = x^\circ, \angle Q = (3x - 2)^\circ,$$

$$\angle R = y^\circ \text{ and}$$

$$\angle R - \angle Q = 9^\circ$$



We know that the sum of three angles in a triangle is 180° .

$$\text{So, } \angle P + \angle Q + \angle R = x + 3x - 2 + y = 180$$

$$\Rightarrow 4x + y = 182 \quad \dots(1)$$

It is also given that

$$\angle R - \angle Q = 9^\circ$$

$$\text{or } y - (3x - 2) = 9$$

$$\Rightarrow y - 3x + 2 = 9$$

$$\Rightarrow 3x - y = -7 \quad \dots(2)$$

Adding equation (1) with (2), we get

$$7x = 175$$

$$\Rightarrow x = 25$$

Substituting $x = 25$ in equation (2), we get

$$3 \times 25 - y = -7$$

$$\Rightarrow y = 75 + 7 = 82$$

Thus, $P = x^\circ = 25^\circ$

$$Q = (3x - 2)^\circ = (3 \times 25 - 2)^\circ = 73^\circ$$

and $R = y = 82^\circ$.

IMPORTANT POINTS TO BE REMEMBERED

1. An equation of the form $ax + by + c = 0$ is linear in two variables x and y . For all a and b are the coefficients of x and y respectively such that $a, b \in \mathbb{R}$ and $a \neq 0, b \neq 0$
2. The graph of a linear equation in two variables is a straight line
3. A linear equation in two variables has infinitely many solutions
4. Slope of the line $ax + by + c = 0$ is $-a/b$
5. Equation of x -axis is $y = 0$ and equation of y -axis is $x = 0$
6. The graph of the line $x = a$ is parallel to y -axis
7. The graph of the line $y = b$ is parallel to x -axis.
8. Every point on the graph of a linear equation in two variables is a solution of the equation.
9. A pair of linear equations in two variables x and y can be represented algebraically as follows :

$$a_1x + b_1y + c_1 = 0$$

$$a_2x + b_2y + c_2 = 0$$
 where $a_1, a_2, b_1, b_2, c_1, c_2$ are real number such that $a_1^2 + b_1^2 \neq 0, a_2^2 + b_2^2 \neq 0$.
10. Graphically or geometrically a pair of linear equations

$$a_1x + b_1y + c_1 = 0$$

$$a_2x + b_2y + c_2 = 0$$

in two variables represents a pair of straight lines which are

(i) intersecting, if $\frac{a_1}{a_2} \neq \frac{b_1}{b_2}$

(ii) parallel, if $\frac{a_1}{a_2} = \frac{b_1}{b_2} \neq \frac{c_1}{c_2}$

(iii) coincident, if $\frac{a_1}{a_2} = \frac{b_1}{b_2} = \frac{c_1}{c_2}$

11. A pair of linear equations in two variables can be solved by the :

(i) Graphical method

(ii) Algebraic method

12. To solve a pair of linear equations in two variables by Graphical method, we first draw the lines represented by them.

(i) If the pair of lines intersect at a point, then we say that the pair is consistent and the coordinates of the point provide us the unique solution.

(ii) If the pair of lines are parallel, then the pair has no solution and is called inconsistent pair of equations.

(iii) If the pair of lines are coincident, then it has infinitely many solutions each point on the line being of solution. In this case, we say that the pair of linear equations is consistent with infinitely many solutions.

13. To solve a pair of linear equation in two variables algebraically, we have following methods :

(i) Substitution method

(ii) Elimination method

(iii) Cross-multiplication method

14. If $a_1x + b_1y + c_1 = 0$

$$a_2x + b_2y + c_2 = 0$$

is a pair of linear equation in two variable x and y such that :

(i) $\frac{a_1}{a_2} \neq \frac{b_1}{b_2}$, then the pair of linear equations is

consistent with a unique solution.

(ii) $\frac{a_1}{a_2} = \frac{b_1}{b_2} \neq \frac{c_1}{c_2}$, then the pair of linear equations is inconsistent.

(iii) $\frac{a_1}{a_2} = \frac{b_1}{b_2} = \frac{c_1}{c_2}$, then the pair of linear equations is consistent with infinitely many solutions.